

NTA CMAT 2019

Section : Quantitative Techniques and Data Interpretation

Q.1 What value should come in place of question mark (?) in the following equation ?

$$360\sqrt{?} + 4500 = 19700 - 9800$$

- Options
1. 225
 2. 295
 3. 395
 4. 215

Question Type : MCQ

Question ID : 41652912385

Option 1 ID : 41652948366

Option 2 ID : 41652948368

Option 3 ID : 41652948369

Option 4 ID : 41652948367

Status : Answered

1

Q.2 The angle created by two hands of a clock when the clock shows 5.20 P.M. is :

- Options
1. 35°
 2. 60°
 3. 40°
 4. 30°

Question Type : MCQ

Question ID : 41652912402

Option 1 ID : 41652948435

Option 2 ID : 41652948437

Option 3 ID : 41652948436

Option 4 ID : 41652948434

Status : Answered

Q.3

The speeds of 3 cars in the ratio 5 : 4 : 6. The ratio between the time taken by them to travel same distance is :

Options

1. 15 : 12 : 11
2. 10 : 20 : 30
3. 12 : 10 : 13
4. 12 : 15 : 10

Question Type : MCQ

Question ID : 41652912384

Option 1 ID : 41652948364

Option 2 ID : 41652948362

Option 3 ID : 41652948363

Option 4 ID : 41652948365

Status : Answered

Q.4 The following table lists the marks of seven students(rows) of a class across six subjects(columns). The Numbers in the parenthesis indicate the maximum marks of the subject concerned. Use the data in the table to answer the question that follows :

	English (150)	Hindi (120)	History (100)	Physics (100)	Maths (100)	Chemistry (100)
Maya	90	50	90	60	70	80
Arya	100	80	88	60	80	70
Riya	90	72	70	72	91	70
Sreya	85	65	80	80	60	60
Roopesh	80	55	85	95	50	90
Chandesh	70	75	65	85	40	61
Hanish	65	35	50	77	80	80

Who is the topper of the class ?

- Options
1. Roopesh
 2. Maya
 3. Arya
 4. Riya

Question Type : MCQ

Question ID : 41652912396

Option 1 ID : 41652948413

Option 2 ID : 41652948410

Option 3 ID : 41652948411

Option 4 ID : 41652948412

Status : Answered

Q.5 Two oranges, three bananas and four apples cost Rs. 15. Three oranges, two bananas and one apple cost Rs. 10. I bought 3 oranges, 3 bananas and 3 apples. How much did I pay ?

Options

1. Rs. 10
2. Rs. 15
3. Cannot be determined
4. Rs. 8

Question Type : MCQ

Question ID : 41652912406

Option 1 ID : 41652948450

Option 2 ID : 41652948452

Option 3 ID : 41652948453

Option 4 ID : 41652948451

Status : Answered

2

Q.6 The sum of three consecutive odd numbers is 20 more than the first number. What is the middle number ?

Options

1. 11
2. Data inadequate
3. 7
4. 9

Question Type : MCQ

Question ID : 41652912395

Option 1 ID : 41652948408

Option 2 ID : 41652948409

Option 3 ID : 41652948406

Option 4 ID : 41652948407

Status : Answered

4

Q.7 Rajesh can check the quality of 1000 items in 5 hours and Rakesh can complete the 75% of same job in 3 hours. How much time is required for both of them to check 1300 items, if Rakesh stops checking after 2 hours ?

- Options**
1. 4 hours
 2. 2 hours
 3. 1 hour
 4. 3 hours

Question Type : MCQ

Question ID : 41652912397

Option 1 ID : 41652948415

Option 2 ID : 41652948416

Option 3 ID : 41652948417

Option 4 ID : 41652948414

Status : Answered

1

Q.8 What is the area covered by a bell-shaped curve from -6 sigma to $+6$ sigma in normal distribution ?

- Options**
1. 99.73 %
 2. 99.99 %
 3. 99.999666 %
 4. 99.9999 %

Question Type : MCQ

Question ID : 41652912401

Option 1 ID : 41652948430

Option 2 ID : 41652948431

Option 3 ID : 41652948433

Option 4 ID : 41652948432

Status : Marked For Review

2

Q.9 If $f(x) = x^3 - 4x + p$ and $f(0)$ and $f(1)$ are of opposite signs, then which of the following is necessarily true ?

- Options
1. $-2 < p < 1$
 2. $-1 < p < 2$
 3. $-3 < p < 0$
 4. $0 < p < 3$

Question Type : MCQ

Question ID : 41652912400

Option 1 ID : 41652948427

Option 2 ID : 41652948426

Option 3 ID : 41652948428

Option 4 ID : 41652948429

Status : Marked For Review

4

Q.10 A rectangular box of width(a), length(b), and height(c) has a solid cylinder of height 'c' and of diameter 'a' placed within it. If $a=6$, $b=8$ and $c=10$, how much volume is left in the rectangular box ?

- Options
1. $240 - 96 \pi$
 2. $480 - 90 \pi$
 3. $480 - 180 \pi$
 4. $380 - 90 \pi$

Question Type : MCQ

Question ID : 41652912404

Option 1 ID : 41652948443

Option 2 ID : 41652948444

Option 3 ID : 41652948445

Option 4 ID : 41652948442

Status : Answered

2

- Q.11 The total volume of soaps sold is 680 lakhs units. The volume of Lux sold is 136 lakh units. If the percentage of Lifebuoy sold is 30%, Camay 10%, Liril 15% and Mysore Sandal 10%, answer the following questions.



What is the market share of others in percentage points ?

- Options
1. 13.5
 2. 15
 3. 16
 4. 16.8

Question Type : MCQ

Question ID : 41652912392

Option 1 ID : 41652948397

Option 2 ID : 41652948394

Option 3 ID : 41652948395

Option 4 ID : 41652948396

Status : Answered

2

- Q.12 A management institute has 6 senior professors and 4 junior professors, 3 professors are selected at random for a government project. The probability that at least one of the junior professors would get selected is :

- Options
1. $\frac{5}{6}$
 2. $\frac{1}{6}$

3. $\frac{2}{3}$

4. $\frac{1}{5}$

Question Type : MCQ

Question ID : 41652912408

Option 1 ID : 41652948458

Option 2 ID : 41652948461

Option 3 ID : 41652948459

Option 4 ID : 41652948460

Status : Answered

3

Q.13 In a simultaneous throw of a pair of dice, find the probability of getting a total of 9 or more.

Options 1. $\frac{5}{12}$

2. $\frac{2}{7}$

3. $\frac{5}{18}$

4. $\frac{2}{36}$

Question Type : MCQ

Question ID : 41652912389

Option 1 ID : 41652948384

Option 2 ID : 41652948385

Option 3 ID : 41652948382

Option 4 ID : 41652948383

Status : Answered

3

Q.14 It costs Rs. 6000/- and Rs. 6,100/- respectively to paint the 4 walls of 2 square halls, of the same height. If the length of one hall exceeds the length of the other by 1 m and the cost of painting is Rs. 5 per sq.m., what is the height of the two walls ?

Options 1. 10 m

2. 3 m

3. 5 m

4. 7.5 m

Question Type : MCQ

Question ID : 41652912386

Option 1 ID : 41652948373

Option 2 ID : 41652948370

Option 3 ID : 41652948371

Option 4 ID : 41652948372

Status : Answered

3

Q.15 How many minutes does Mr. Surya take to cover a distance of 500 m if he runs at a speed of 25 km/hr ?

- Options
1. 35 sec
 2. 72 sec
 3. 80 sec
 4. 60 sec

Question Type : MCQ

Question ID : 41652912390

Option 1 ID : 41652948387

Option 2 ID : 41652948388

Option 3 ID : 41652948389

Option 4 ID : 41652948386

Status : Answered

2

Q.16 In a triangle ABC, AD is the bisector of angle A. If AC = 4.2 cm, DC = 6 cm, BC = 10 cm, find AB.

- Options
1. 2.9 cm
 2. 2.7 cm
 3. 2.8 cm
 4. 3.4 cm

Question Type : MCQ

Question ID : 41652912388

Option 1 ID : 41652948381

Option 2 ID : 41652948378

Option 3 ID : 41652948379

Option 4 ID : 41652948380

Status : Answered

3

Q.17 What is the probability of drawing a king or a heart from a deck of cards ?

Options 1. 17/15

2. 4/13

3. 1/13

4. 1/52

Question Type : MCQ

Question ID : 41652912387

Option 1 ID : 41652948376

Option 2 ID : 41652948375

Option 3 ID : 41652948374

Option 4 ID : 41652948377

Status : Answered

2

Q.18 The maximum value of $3 \cos x + 4 \sin x + 8$ is :

Options 1. 7

2. 13

3. 3

4. 15

Question Type : MCQ

Question ID : 41652912393

Option 1 ID : 41652948400

Option 2 ID : 41652948401

Option 3 ID : 41652948398

Option 4 ID : 41652948399

Status : Answered

4

Q.19 In a building there are 30 cylindrical pillars. The radius of each pillar is 35 cm and height is 5 m. Find out the cost of painting the curved surface of half the number of pillars. The rate of painting is Rs. 10 per m^2 .

- Options
1. Rs. 8250
 2. Rs. 4125
 3. Rs. 16,500
 4. Rs. 1650

Question Type : MCQ

Question ID : 41652912399

Option 1 ID : 41652948422

Option 2 ID : 41652948425

Option 3 ID : 41652948423

Option 4 ID : 41652948424

Status : Answered

3

Q.20 Three solid cubes of sides 1 cm, 6 cm and 8 cm are melted to form a new cube. Find the surface area of the cube so formed.

- Options
1. 125 cm
 2. 729 cm
 3. 486 cm
 4. 529 cm

Question Type : MCQ

Question ID : 41652912394

Option 1 ID : 41652948404

Option 2 ID : 41652948402

Option 3 ID : 41652948403

Option 4 ID : 41652948405

Status : Marked For Review

3

Q.21 The length, breadth and height of a rectangular cuboid are in the ratio 1 : 2 : 3. If the length, breadth and height are increased by 100% each then what would be the increase in the volume of the cuboid ?

- Options**
1. 8 times
 2. 9 times
 3. 7 times
 4. 10 times

Question Type : MCQ

Question ID : 41652912403

Option 1 ID : 41652948439

Option 2 ID : 41652948440

Option 3 ID : 41652948438

Option 4 ID : 41652948441

Status : Answered

1

Q.22 The speed of a boat in still water is 5 km/hr. If it takes thrice as much time in going 20 km upstream as in going the same distance downstream, find the speed of the stream.

- Options**
1. 5.5 km/hr
 2. 3.5 km/hr
 3. 2.5 km/hr
 4. 4.5 km/hr

Question Type : MCQ

Question ID : 41652912407

Option 1 ID : 41652948457

Option 2 ID : 41652948455

Option 3 ID : 41652948454

Option 4 ID : 41652948456

Status : Marked For Review

3

Q.23 There are 6 tasks and 6 persons. Tasks cannot be assigned either to person 1 or person 2. task 2 must be assigned to either person 3 or person 4. Every person is to be assigned one task. In how many ways can the assignment be done ?

- Options**
1. 192
 2. 144
 3. 180
 4. 360

Question Type : MCQ

Question ID : 41652912398

Option 1 ID : 41652948420

Option 2 ID : 41652948418

Option 3 ID : 41652948419

Option 4 ID : 41652948421

Status : Answered

3

Q.24 If one third of one-fourth of a number is 15, then three-tenth of that number is :

- Options**
1. 54
 2. 38
 3. 46
 4. 61

Question Type : MCQ

Question ID : 41652912391

Option 1 ID : 41652948392

Option 2 ID : 41652948391

Option 3 ID : 41652948390

Option 4 ID : 41652948393

Status : Answered

1

Q.25 Students in a commerce class took a test. The average score of men is 70 and of women is 83. The class average is 76. What is the ratio of men to women in the class ?

- Options**
1. 7 : 6
 2. 7 : 8
 3. 8 : 7
 4. 6 : 7

Question Type : MCQ

Question ID : 41652912405

Option 1 ID : 41652948447

Option 2 ID : 41652948448

Option 3 ID : 41652948449

Option 4 ID : 41652948446

Status : Answered

1

Section : Logical Reasoning

Q.1 For the Assertion (A) and Reason (R) given below choose the correct alternative from the following :

(A) : Copper is used to make electric wire

(R) : Copper has very low electric resistance

- Options**
1. (A) is true, (R) is false
 2. Both (A) and (R) are true and (R) is not the correct explanation of (A)
 3. Both (A) and (R) are true and (R) is the correct explanation of (A)
 4. (A) is false, (R) is true

Question Type : MCQ

Question ID : 41652912412

Option 1 ID : 41652948476

Option 2 ID : 41652948475

Option 3 ID : 41652948474

Option 4 ID : 41652948477

Status : Answered

1

Q.2 In analogy, you are required to guess the function relation between the two given words and find the similar relation between the words given in any of the option.

CUP : LIP :: BIRD : _____

- Options**
1. GRASS
 2. BUSH
 3. FOREST
 4. BEAK

Question Type : MCQ

Question ID : 41652912418

Option 1 ID : 41652948501

Option 2 ID : 41652948498

Option 3 ID : 41652948500

Option 4 ID : 41652948499

Status : Answered

4

Q.3 Find the missing number in the series below :

24, 28, 30, 34, _____

- Options**
1. 40
 2. 38
 3. 35
 4. 36

Question Type : MCQ

Question ID : 41652912411

Option 1 ID : 41652948473

Option 2 ID : 41652948471

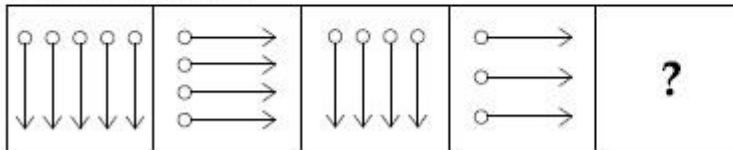
Option 3 ID : 41652948472

Option 4 ID : 41652948470

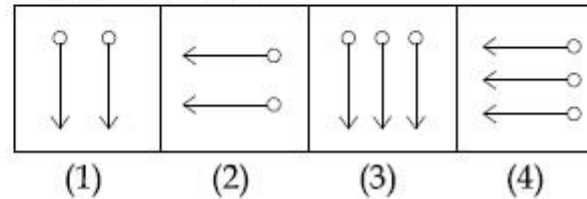
Status : Answered

- Q.4** In the following question, a group of four figures following certain sequence is given as problem figures. Problem figures are followed by another group of four figures known as answer figures marked (1), (2), (3), (4). Find out the figure from the answer figures which when placed next to the problem figures will continue the sequence of the problem figures.

Problem figure :



Answer figure :



- Options
1. (4)
 2. (3)
 3. (2)
 4. (1)

Question Type : MCQ

Question ID : 41652912429

Option 1 ID : 41652948545

Option 2 ID : 41652948544

Option 3 ID : 41652948543

Option 4 ID : 41652948542

Status : Answered

2

- Q.5** Vasishta started walking positioning his back towards the sun. After sometime, Vasishta turned left, the turned right, and then towards left again. Which is the direction Vasishta is going now ?

- Options
1. South or West
 2. East or West
 3. North or West
 4. North or South

Question Type : MCQ

Question ID : 41652912432

Option 1 ID : 41652948557

Option 2 ID : 41652948555

Option 3 ID : 41652948556

Option 4 ID : 41652948554

Status : Answered

4

Q.6 The missing term in the series 2, 1, $1/2$, $1/4$, _____ is

Options 1. $1/16$

2. $1/3$

3. $2/8$

4. $1/8$

Question Type : MCQ

Question ID : 41652912424

Option 1 ID : 41652948525

Option 2 ID : 41652948522

Option 3 ID : 41652948524

Option 4 ID : 41652948523

Status : Answered

4

Q.7 Read the following information carefully to answer the questions given below it.

(a) 'A + B' means that 'A' is the father of 'B'

(b) 'A - B' means that 'A' is the wife of 'B'

(c) 'A × B' means that 'A' is the brother of 'B'

(d) 'A ÷ B' means that 'A' is the daughter of 'B'

If it is given 'P ÷ R + S + Q', then which of the following is true ?

Options 1. Q is the aunt of P

2. P is the aunt of Q

3. P is the daughter of Q

4. P is the mother of Q

Question Type : MCQ

Question ID : 41652912428

Option 1 ID : 41652948540

Option 2 ID : 41652948539

Option 3 ID : 41652948538

Option 4 ID : 41652948541

Status : Answered

2

Q.8 In analogy, you are required to guess the relation between the two given words and fill in the blank after finding the similar relationship by choosing any word from the options given below :

Hen : Chick :: Frog : _____

Options

1. Puppy

2. Tadpole

3. Fawn

4. Kitten

Question Type : MCQ

Question ID : 41652912417

Option 1 ID : 41652948496

Option 2 ID : 41652948495

Option 3 ID : 41652948497

Option 4 ID : 41652948494

Status : Answered

2

Q.9 Which word does not belong with the others ?

Options

1. Cornea

2. Pupil

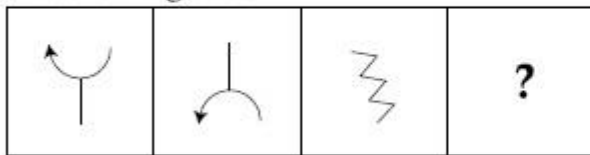
3. Retina

4. Vision

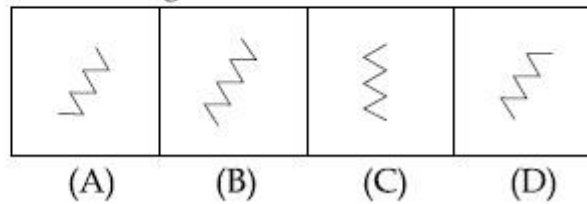
Question Type : MCQ
Question ID : 41652912433
Option 1 ID : 41652948559
Option 2 ID : 41652948561
Option 3 ID : 41652948560
Option 4 ID : 41652948558
Status : Answered
4

Q.10 Select the suitable figure from the answer figures that would replace the question mark (?).

Problem figure :



Answer figure :



- Options
1. B
 2. D
 3. A
 4. C

Question Type : MCQ
Question ID : 41652912422
Option 1 ID : 41652948515
Option 2 ID : 41652948517
Option 3 ID : 41652948514
Option 4 ID : 41652948516
Status : Answered
3

Q.11 Choose the necessary for the given word.
"Swimming"

- Options
1. Water
 2. Life jacket

3. Suit

4. Pool

Question Type : MCQ

Question ID : 41652912420

Option 1 ID : 41652948508

Option 2 ID : 41652948509

Option 3 ID : 41652948507

Option 4 ID : 41652948506

Status : Answered

4

Q.12 In the given figure, if the centres of all the circles are joined by horizontal and vertical lines, then find the number of squares that can be formed.



Options 1. 6

2. 8

3. 1

4. 7

Question Type : MCQ

Question ID : 41652912430

Option 1 ID : 41652948546

Option 2 ID : 41652948548

Option 3 ID : 41652948549

Option 4 ID : 41652948547

Status : Answered

2

Q.13 In the following question, the main statement is followed by four sentences. Select the pair of sentences that relate logically to the given statement.

Either the employees have no confidence in the management or they are hostile by nature.

- A. They are hostile by nature
- B. They are not hostile by nature
- C. They have confidence in the management
- D. They have no confidence in the management

- Options
- 1. BD
 - 2. CB
 - 3. DA
 - 4. BA

Question Type : MCQ

Question ID : 41652912425

Option 1 ID : 41652948529

Option 2 ID : 41652948527

Option 3 ID : 41652948528

Option 4 ID : 41652948526

Status : Answered

3

Q.14 If JAPAN is coded KCSES, then the code of CASTLE will be _____.

- Options
- 1. DIJOBT
 - 2. DJKRDP
 - 3. DKMSGR
 - 4. DCVXQK

Question Type : MCQ

Question ID : 41652912414

Option 1 ID : 41652948482

Option 2 ID : 41652948483

Option 3 ID : 41652948484

Option 4 ID : 41652948485

Status : Answered

4

Q.15 In some way 123 means "he is talented", 3456 means "talented people earn more", 45678 means "people earn more to enjoy". Then what is equal to "earn" ?

Options

1.

6

2.

7

3.

5

4.

4

Question Type : MCQ

Question ID : 41652912410

Option 1 ID : 41652948468

Option 2 ID : 41652948469

Option 3 ID : 41652948467

Option 4 ID : 41652948466

Status : Answered

3

Q.16 Find the odd one out of given combinations :

Options

1.

ABDF

2.

TUWY

3.

GHJM

4.

NOQS

Question Type : MCQ

Question ID : 41652912409

Option 1 ID : 41652948462

Option 2 ID : 41652948465

Option 3 ID : 41652948463

Option 4 ID : 41652948464

Status : Answered

3

Q.17 Which word doesnot belong with the others ?

- Options**
1. Violin
 2. Cello
 3. Guitar
 4. Flute

Question Type : MCQ

Question ID : 41652912419

Option 1 ID : 41652948504

Option 2 ID : 41652948505

Option 3 ID : 41652948502

Option 4 ID : 41652948503

Status : Answered

2

Q.18 Pointing at Ankit, Shruti said, "his father is the only son of my grandfather." How is Ankit related to Shruti ?

- Options**
1. Mother
 2. Sister
 3. Brother
 4. Daughter

Question Type : MCQ

Question ID : 41652912421

Option 1 ID : 41652948512

Option 2 ID : 41652948511

Option 3 ID : 41652948510

Option 4 ID : 41652948513

Status : Answered

3

Q.19 In the following question below, 3 statements I, II and III are given. You are required to find out which of the given statement(s) is/are sufficient to answer the question.

How old was Deepa on 30th October 2018 ?

- (I) Deepa is 6 yrs older than her sister Prabha
- (II) Prabha is 29 yrs younger than her mother
- (III) Deepa's mother celebrated her 45th birthday on July 27th 2018

- Options**
1. (I) and (II)
 2. (II) and (III)
 3. All (I), (II) and (III)
 4. (I) and (III)

Question Type : MCQ

Question ID : 41652912413

Option 1 ID : 41652948478

Option 2 ID : 41652948480

Option 3 ID : 41652948479

Option 4 ID : 41652948481

Status : Answered

3

Q.20 In a certain code RIPPLE is written as 613382 and LIFE is written as 8192. How is PILLER written in that code ?

- Options**
1. 318826
 2. 312688
 3. 618826
 4. 318286

Question Type : MCQ

Question ID : 41652912415

Option 1 ID : 41652948486

Option 2 ID : 41652948489

Option 3 ID : 41652948488

Option 4 ID : 41652948487

Status : Answered

1

- Q.21** Akshay and Ajay are friends studying in same class. Ajay could not score as much marks as Akshay scored and hence Ajay's father took Ajay into task. Ajay replied that there are so many like me in the class. Based on the information findout the answer to the question : Akshay ranks 13th in the class where 33 students are studying. There are 5 students below Ajay rankwise.
How many students are there between Akshay and Ajay ?

- Options**
1. 12
 2. 16
 3. 14
 4. 15

Question Type : MCQ

Question ID : 41652912423

Option 1 ID : 41652948521

Option 2 ID : 41652948518

Option 3 ID : 41652948520

Option 4 ID : 41652948519

Status : Answered

3

- Q.22** If X is the brother of Y and P, Z is the mother of Y and Q is the father of X, which one of the following statement is not definitely true ?

- Options**
1. X is the son of Z
 2. Z is the wife of Q
 3. X is the father of P
 4. Y is the brother of P

Question Type : MCQ

Question ID : 41652912416

Option 1 ID : 41652948491

Option 2 ID : 41652948492

Option 3 ID : 41652948493

Option 4 ID : 41652948490

Status : Answered

3

Q.23 Direction :

In the following question a statement is given followed by two conclusions. Choose the correct option.

Statement :

Any student who follow un-ethical practices in examination disqualifies himself from examinations

Conclusion :

- (I) Those who involve in un-ethical practices in examination shall be debarred
- (II) Examination system should be improved

Options 1. Both Conclusion (I) and (II) follow

2. Neither Conclusion (I) or (II) follows

3. Only Conclusion (I) follows

4. Only Conclusion (II) follows

Question Type : MCQ

Question ID : 41652912426

Option 1 ID : 41652948533

Option 2 ID : 41652948532

Option 3 ID : 41652948530

Option 4 ID : 41652948531

Status : Answered

3

Q.24 Direction :

In the following question a statement is given followed by two arguments choose the correct option.

Statement : Should the political parties be banned ?

Argument 1 : Yes, It is necessary to teach a lesson to the politicians

Argument 2 : No, it will lead to an end of democracy

- Options**
1. Only (II) is strong
 2. Only (I) is strong
 3. Both the arguments are strong
 4. Neither (I), nor (II) is strong

Question Type : MCQ

Question ID : 41652912427

Option 1 ID : 41652948537

Option 2 ID : 41652948536

Option 3 ID : 41652948534

Option 4 ID : 41652948535

Status : Answered

1

Q.25 There are four Trees - Lemon, Coconut, Mango and Neem each at a different corner of a rectangular plot. A well is located at one corner and a cabin at another corner. Lemon and Coconut trees are on either side of the gate, which is located at the centre of side, opposite to the side, extremes of which the well and cabin are located. The mango tree is not at the corner where the cabin is located.

Which of the following pairs can be diagonally opposite to each other in the plot ?

- Options**
1. Mango tree and Well
 2. Cabin and Neem tree
 3. Neem tree and Lemon tree
 4. Coconut tree and Lemon tree

Question Type : MCQ

Question ID : 41652912431

Option 1 ID : 41652948552

Option 2 ID : 41652948551

Option 3 ID : 41652948550

Option 4 ID : 41652948553

Status : Answered

3

Comprehension:

Read the following passage and answer the question that follows :

An endangered language is one that is likely to become extinct in the near future. Many languages are falling out of use and being replaced by others that are more widely used in the region or nation, such as English in the U.S. or Spanish in Mexico. Unless current trends are reversed, these endangered languages will become extinct within the next century. Many other languages are no longer being learned by new generations of children or by new adult speakers ; these languages will become extinct when their last speaker dies. Infact, dozens of languages today have only one native speaker still living, and that person's death will mean the extinction of the language : It will no longer be spoken, or known, by anyone.

Ancient Greek and Latin languages are considered dead because they are no longer spoken in the form in which we find them in ancient writings. But they weren't abruptly replaced by other languages ; instead, Ancient Greek slowly evolved into modern Greek, and Latin slowly evolved into modern Italian, Spanish, French, Romanian, and other languages. In the same way, the Middle English of Chaucer's day is no longer spoken, but it has evolved into Modern English.

SubQuestion No : 1

Q.1 "These languages will become extinct"

In the above sentence "these" refers to :

- Options**
1. Other languages
 2. Endangered languages
 3. Spanish in Mexico
 4. Middle English

Question Type : MCQ

Question ID : 41652912436

Option 1 ID : 41652948569

Option 2 ID : 41652948567

Option 3 ID : 41652948566

Option 4 ID : 41652948568

Status : Answered

Comprehension:

Read the following passage and answer the question that follows :

An endangered language is one that is likely to become extinct in the near future. Many languages are falling out of use and being replaced by others that are more widely used in the region or nation, such as English in the U.S. or Spanish in Mexico. Unless current trends are reversed, these endangered languages will become extinct within the next century. Many other languages are no longer being learned by new generations of children or by new adult speakers ; these languages will become extinct when their last speaker dies. Infact, dozens of languages today have only one native speaker still living, and that person's death will mean the extinction of the language : It will no longer be spoken, or known, by anyone.

Ancient Greek and Latin languages are considered dead because they are no longer spoken in the form in which we find them in ancient writings. But they weren't abruptly replaced by other languages ; instead, Ancient Greek slowly evolved into modern Greek, and Latin slowly evolved into modern Italian, Spanish, French, Romanian, and other languages. In the same way, the Middle English of Chaucer's day is no longer spoken, but it has evolved into Modern English.

SubQuestion No : 2

Q.2 What is endangered language ?

- Options**
1. The language that is not spoken by anyone at all
 2. A language that is most likely to expand in the near future
 3. The language that is spoken by many people
 4. A language that is most likely to die in the near future

Question Type : MCQ

Question ID : 41652912435

Option 1 ID : 41652948563

Option 2 ID : 41652948565

Option 3 ID : 41652948562

Option 4 ID : 41652948564

Status : Answered

Comprehension:

Read the following passage and answer the question that follows :

An endangered language is one that is likely to become extinct in the near future. Many languages are falling out of use and being replaced by others that are more widely used in the region or nation, such as English in the U.S. or Spanish in Mexico. Unless current trends are reversed, these endangered languages will become extinct within the next century. Many other languages are no longer being learned by new generations of children or by new adult speakers ; these languages will become extinct when their last speaker dies. Infact, dozens of languages today have only one native speaker still living, and that person's death will mean the extinction of the language : It will no longer be spoken, or known, by anyone.

Ancient Greek and Latin languages are considered dead because they are no longer spoken in the form in which we find them in ancient writings. But they weren't abruptly replaced by other languages ; instead, Ancient Greek slowly evolved into modern Greek, and Latin slowly evolved into modern Italian, Spanish, French, Romanian, and other languages. In the same way, the Middle English of Chaucer's day is no longer spoken, but it has evolved into Modern English.

SubQuestion No : 3

Q.3 Spanish language evolved out of :

- Options**
1. English
 2. Greek
 3. Latin
 4. French

Question Type : MCQ

Question ID : 41652912437

Option 1 ID : 41652948570

Option 2 ID : 41652948571

Option 3 ID : 41652948572

Option 4 ID : 41652948573

Status : Answered

3

Comprehension:

Read the following passage and answer the question that follows.

There are no World Trade Organisation (WTO) definitions of “developed” and “developing” countries. Members announce for themselves whether they are “developed” or “developing” countries. However, other members can challenge the decision of a member to make use of provisions available to developing countries.

Developing country status in the WTO brings certain rights. There are for example provisions in some WTO Agreements which provide developing countries with longer transaction periods before they are required to fully implement the agreement and developing countries can receive technical assistance.

That a WTO member announces itself as a developing country does not automatically mean that it will benefit from the unilateral preference schemes of some of the developed country members such as the Generalized System of Preferences (GSP). In practice, it is the preference giving country which decides the list of developing countries.

SubQuestion No : 4

Q.4 Who decides whether one country is developing or developed ?

- Options
1. The neighbouring countries
 2. The country itself
 3. The World Trade Organization
 4. The preference giving country

Question Type : MCQ

Question ID : 41652912439

Option 1 ID : 41652948575

Option 2 ID : 41652948576

Option 3 ID : 41652948574

Option 4 ID : 41652948577

Status : Answered

2

Comprehension:

Read the following passage and answer the question that follows.

There are no World Trade Organisation (WTO) definitions of “developed” and “developing” countries. Members announce for themselves whether they are “developed” or “developing” countries. However, other members can challenge the decision of a member to make use of provisions available to developing countries.

Developing country status in the WTO brings certain rights. There are for example provisions in some WTO Agreements which provide developing countries with longer transaction periods before they are required to fully implement the agreement and developing countries can receive technical assistance.

That a WTO member announces itself as a developing country does not automatically mean that it will benefit from the unilateral preference schemes of some of the developed country members such as the Generalized System of Preferences (GSP). In practice, it is the preference giving country which decides the list of developing countries.

SubQuestion No : 5

Q.5 Why would a country likes to announce itself as a developing country ?

- Options
1. So that it can become the preference giving country
 2. So that it need implement WTO agreements
 3. So that it can become member of WTO
 4. So that it gets some relaxation of time in implemenation WTO agreements

Question Type : MCQ

Question ID : 41652912441

Option 1 ID : 41652948585

Option 2 ID : 41652948583

Option 3 ID : 41652948582

Option 4 ID : 41652948584

Status : Answered

4

Comprehension:

Read the following passage and answer the question that follows.

There are no World Trade Organisation (WTO) definitions of “developed” and “developing” countries. Members announce for themselves whether they are “developed” or “developing” countries. However, other members can challenge the decision of a member to make use of provisions available to developing countries.

Developing country status in the WTO brings certain rights. There are for example provisions in some WTO Agreements which provide developing countries with longer transition periods before they are required to fully implement the agreement and developing countries can receive technical assistance.

That a WTO member announces itself as a developing country does not automatically mean that it will benefit from the unilateral preference schemes of some of the developed country members such as the Generalized System of Preferences (GSP). In practice, it is the preference giving country which decides the list of developing countries.

SubQuestion No : 6

Q.6 Who can change the decision of a country to make use of provisions available to developing countries ?

Options

1. Any neighbouring country
2. The preference giving country
3. The World Trade Organization
4. Any member country of WTO

Question Type : MCQ

Question ID : 41652912440

Option 1 ID : 41652948579

Option 2 ID : 41652948581

Option 3 ID : 41652948578

Option 4 ID : 41652948580

Status : Answered

1

Comprehension:

Read the following passage and answer the question that follows.

When a child is born, her first connection to the world is established through her mother, or in a broader sense, her parents. An infant sees the world through her parent's eyes ; she tries to imbibe everything she recognises in her parents. Thus, a parent-child relationship lays the foundation of the '*building of her life*'. Parenting is the bringing up of a child. It is like the nourishment that is necessary for a sapling to grow into a big and fruitful tree. Hence, for a child to grow into a wonderful human being, good parenting is essential.

Parenting styles vary from culture to culture. The world is a big place comprising of a variety of people having different ways of living. Although culture is the key ingredient, the economic situation and standard of living also have an impact on parenting. While there are a common set of values in different cultures like honesty and integrity, the value system stands divided on some of the major facets of parenting, exemplified by the comparison of the Indian style with that of the West.

SubQuestion No : 7

Q.7 Which of the following is a major differentiator on some of the major facets of parenting ?

- Options
1. Love
 2. Intregrity
 3. Honesty
 4. Value system

Question Type : MCQ

Question ID : 41652912443

Option 1 ID : 41652948588

Option 2 ID : 41652948587

Option 3 ID : 41652948586

Option 4 ID : 41652948589

Status : Answered

1

Comprehension:

Read the following passage and answer the question that follows.

When a child is born, her first connection to the world is established through her mother, or in a broader sense, her parents. An infant sees the world through her parent's eyes ; she tries to imbibe everything she recognises in her parents. Thus, a parent-child relationship lays the foundation of the '*building of her life*'. Parenting is the bringing up of a child. It is like the nourishment that is necessary for a sapling to grow into a big and fruitful tree. Hence, for a child to grow into a wonderful human being, good parenting is essential.

Parenting styles vary from culture to culture. The world is a big place comprising of a variety of people having different ways of living. Although culture is the key ingredient, the economic situation and standard of living also have an impact on parenting. While there are a common set of values in different cultures like honesty and integrity, the value system stands divided on some of the major facets of parenting, exemplified by the comparison of the Indian style with that of the West.

SubQuestion No : 8

Q.8 Parenting is basically :

Options

1. Culture independent
2. Country independent
3. Common across all cultures
4. Culture dependent

Question Type : MCQ

Question ID : 41652912444

Option 1 ID : 41652948591

Option 2 ID : 41652948592

Option 3 ID : 41652948593

Option 4 ID : 41652948590

Status : Answered

4

Comprehension:

Read the following passage and answer the question that follows.

When a child is born, her first connection to the world is established through her mother, or in a broader sense, her parents. An infant sees the world through her parent's eyes ; she tries to imbibe everything she recognises in her parents. Thus, a parent-child relationship lays the foundation of the '*building of her life*'. Parenting is the bringing up of a child. It is like the nourishment that is necessary for a sapling to grow into a big and fruitful tree. Hence, for a child to grow into a wonderful human being, good parenting is essential.

Parenting styles vary from culture to culture. The world is a big place comprising of a variety of people having different ways of living. Although culture is the key ingredient, the economic situation and standard of living also have an impact on parenting. While there are a common set of values in different cultures like honesty and integrity, the value system stands divided on some of the major facets of parenting, exemplified by the comparison of the Indian style with that of the West.

SubQuestion No : 9

Q.9 Parenting here is compared to :

- Options
1. Nourishing a plant
 2. Looking after a pet
 3. Maintaining a relationship
 4. Maintaining a vehicle

Question Type : MCQ

Question ID : 41652912445

Option 1 ID : 41652948594

Option 2 ID : 41652948595

Option 3 ID : 41652948597

Option 4 ID : 41652948596

Status : Answered

1

Comprehension:

Read the following passage and answer the question that follows.

Steve Jobs was an enigma. He was quirky. I would like to share a few little known facts about the man who pretty much changed the world with one small technological device.

Steve Jobs liked to work bare foot (even while in corporate environments and during million dollar negotiations). He was vegan and often went on diets where he would only eat orange things. He was a Zen Buddhist and extensively travelled India during his youth. He was such a perfectionist that there was a period when he had no furniture in his house at all, because he could not decide what to buy. He used to read his favourite book of all time, every single year 'Autobiography of a yogi', by Paramhansa Yogananda. This man was not afraid to be himself. "Remembering that I'll be dead soon, is the most important tool, I've ever encountered to help me make the big choices in life. Almost everything ... all external expectations, all pride, all fear of embarrassment or failure ... these things just fall away in the face of death, leaving only what is truly important."

Jobs, used to say "Remembering that you are going to die is the best way I know to avoid the trap of thinking you have something to lose. You are already naked. There is no reason, not to follow your heart. No one wants to die. Even people who want to go to heaven, do not want to die to get there. And yet, death is the destination, we all share. No one has ever escaped it, and that is how it should be, because death is very likely the single best invention of life. It is life's change agent. It clears out the old to make way for the new."

SubQuestion No : 10

Q.10 Steve Jobs believed in :

- Options
1. Materialism
 2. Perfectionism
 3. Normatism
 4. Altruism

Question Type : MCQ

Question ID : 41652912448

Option 1 ID : 41652948602

Option 2 ID : 41652948603

Option 3 ID : 41652948604

Option 4 ID : 41652948605

Status : Answered

Comprehension:

Read the following passage and answer the question that follows.

Steve Jobs was an enigma. He was quirky. I would like to share a few little known facts about the man who pretty much changed the world with one small technological device.

Steve Jobs liked to work bare foot (even while in corporate environments and during million dollar negotiations). He was vegan and often went on diets where he would only eat orange things. He was a Zen Buddhist and extensively travelled India during his youth. He was such a perfectionist that there was a period when he had no furniture in his house at all, because he could not decide what to buy. He used to read his favourite book of all time, every single year 'Autobiography of a yogi', by Paramhansa Yogananda. This man was not afraid to be himself. "Remembering that I'll be dead soon, is the most important tool, I've ever encountered to help me make the big choices in life. Almost everything ... all external expectations, all pride, all fear of embarrassment or failure ... these things just fall away in the face of death, leaving only what is truly important."

Jobs, used to say "Remembering that you are going to die is the best way I know to avoid the trap of thinking you have something to lose. You are already naked. There is no reason, not to follow your heart. No one wants to die. Even people who want to go to heaven, do not want to die to get there. And yet, death is the destination, we all share. No one has ever escaped it, and that is how it should be, because death is very likely the single best invention of life. It is life's change agent. It clears out the old to make way for the new."

SubQuestion No : 11

Q.11 This passage tells us :

- Options
1. Steve Job's business management skills.
 2. Some not very well known facts.
 3. Steve Job's life story.
 4. Very well known facts about Steve Jobs.

Question Type : MCQ

Question ID : 41652912452

Option 1 ID : 41652948621

Option 2 ID : 41652948619

Option 3 ID : 41652948620

Comprehension:

Read the following passage and answer the question that follows.

Steve Jobs was an enigma. He was quirky. I would like to share a few little known facts about the man who pretty much changed the world with one small technological device.

Steve Jobs liked to work bare foot (even while in corporate environments and during million dollar negotiations). He was vegan and often went on diets where he would only eat orange things. He was a Zen Buddhist and extensively travelled India during his youth. He was such a perfectionist that there was a period when he had no furniture in his house at all, because he could not decide what to buy. He used to read his favourite book of all time, every single year 'Autobiography of a yogi', by Paramhansa Yogananda. This man was not afraid to be himself. "Remembering that I'll be dead soon, is the most important tool, I've ever encountered to help me make the big choices in life. Almost everything ... all external expectations, all pride, all fear of embarrassment or failure ... these things just fall away in the face of death, leaving only what is truly important."

Jobs, used to say "Remembering that you are going to die is the best way I know to avoid the trap of thinking you have something to lose. You are already naked. There is no reason, not to follow your heart. No one wants to die. Even people who want to go to heaven, do not want to die to get there. And yet, death is the destination, we all share. No one has ever escaped it, and that is how it should be, because death is very likely the single best invention of life. It is life's change agent. It clears out the old to make way for the new."

SubQuestion No : 12

Q.12 In the passage which one of the following is not true ?

- Options
1. No one escapes the death
 2. Death is the single best invention
 3. Look for death
 4. Death is the destination

Question Type : MCQ

Question ID : 41652912450

Option 1 ID : 41652948611

Option 2 ID : 41652948612

Option 3 ID : 41652948613

Option 4 ID : 41652948610

Status : Answered

3

Comprehension:

Read the following passage and answer the question that follows.

Steve Jobs was an enigma. He was quirky. I would like to share a few little known facts about the man who pretty much changed the world with one small technological device.

Steve Jobs liked to work bare foot (even while in corporate environments and during million dollar negotiations). He was vegan and often went on diets where he would only eat orange things. He was a Zen Buddhist and extensively travelled India during his youth. He was such a perfectionist that there was a period when he had no furniture in his house at all, because he could not decide what to buy. He used to read his favourite book of all time, every single year 'Autobiography of a yogi', by Paramhansa Yogananda. This man was not afraid to be himself. "Remembering that I'll be dead soon, is the most important tool, I've ever encountered to help me make the big choices in life. Almost everything ... all external expectations, all pride, all fear of embarrassment or failure ... these things just fall away in the face of death, leaving only what is truly important."

Jobs, used to say "Remembering that you are going to die is the best way I know to avoid the trap of thinking you have something to lose. You are already naked. There is no reason, not to follow your heart. No one wants to die. Even people who wants to go to heaven, do not want to die to get there. And yet, death is the destination, we all share. No one has ever escaped it, and that is how it should be, because death is very likely the single best invention of life. It is life's change agent. It clears out the old to make way for the new."

SubQuestion No : 13

Q.13 The passage is written in :

- Options**
1. First person narrative
 2. Multiple person narrative
 3. Third person narrative
 4. Second person narrative

Question Type : MCQ

Question ID : 41652912447

Option 1 ID : 41652948598

Option 2 ID : 41652948600

Option 3 ID : 41652948599

Option 4 ID : 41652948601

Status : Answered

4

Comprehension:

Read the following passage and answer the question that follows.

Steve Jobs was an enigma. He was quirky. I would like to share a few little known facts about the man who pretty much changed the world with one small technological device.

Steve Jobs liked to work bare foot (even while in corporate environments and during million dollar negotiations). He was vegan and often went on diets where he would only eat orange things. He was a Zen Buddhist and extensively travelled India during his youth. He was such a perfectionist that there was a period when he had no furniture in his house at all, because he could not decide what to buy. He used to read his favourite book of all time, every single year 'Autobiography of a yogi', by Paramhansa Yogananda. This man was not afraid to be himself. "Remembering that I'll be dead soon, is the most important tool, I've ever encountered to help me make the big choices in life. Almost everything ... all external expectations, all pride, all fear of embarrassment or failure ... these things just fall away in the face of death, leaving only what is truly important."

Jobs, used to say "Remembering that you are going to die is the best way I know to avoid the trap of thinking you have something to lose. You are already naked. There is no reason, not to follow your heart. No one wants to die. Even people who want to go to heaven, do not want to die to get there. And yet, death is the destination, we all share. No one has ever escaped it, and that is how it should be, because death is very likely the single best invention of life. It is life's change agent. It clears out the old to make way for the new."

SubQuestion No : 14

Q.14 Which of the following statement is false ?

Steve Jobs had no furniture at his house because :

Options
1. He had no money

2. He wanted to buy the perfect furniture

3. He could not decide what to buy
4. He was a perfectionist

Question Type : MCQ

Question ID : 41652912451

Option 1 ID : 41652948614

Option 2 ID : 41652948617

Option 3 ID : 41652948616

Option 4 ID : 41652948615

Status : Answered

3

Comprehension:

Read the following passage and answer the question that follows.

Steve Jobs was an enigma. He was quirky. I would like to share a few little known facts about the man who pretty much changed the world with one small technological device.

Steve Jobs liked to work bare foot (even while in corporate environments and during million dollar negotiations). He was vegan and often went on diets where he would only eat orange things. He was a Zen Buddhist and extensively travelled India during his youth. He was such a perfectionist that there was a period when he had no furniture in his house at all, because he could not decide what to buy. He used to read his favourite book of all time, every single year 'Autobiography of a yogi', by Paramhansa Yogananda. This man was not afraid to be himself. "Remembering that I'll be dead soon, is the most important tool, I've ever encountered to help me make the big choices in life. Almost everything ... all external expectations, all pride, all fear of embarrassment or failure ... these things just fall away in the face of death, leaving only what is truly important."

Jobs, used to say "Remembering that you are going to die is the best way I know to avoid the trap of thinking you have something to lose. You are already naked. There is no reason, not to follow your heart. No one wants to die. Even people who want to go to heaven, do not want to die to get there. And yet, death is the destination, we all share. No one has ever escaped it, and that is how it should be, because death is very likely the single best invention of life. It is life's change agent. It clears out the old to make way for the new."

SubQuestion No : 15

Q.15 "Remembering that you are going to die, is the best way I know" I in this line is :

Options
1. Any manager

2. The narrator in the article
3. The author of the article
4. Steve Jobs

Question Type : MCQ

Question ID : 41652912449

Option 1 ID : 41652948609

Option 2 ID : 41652948607

Option 3 ID : 41652948606

Option 4 ID : 41652948608

Status : Answered

4

Q.16 Choose the word that is closest in meaning to the word :

ABRIDGE

Options

1. Join
2. Shorten
3. Understand
4. To fill the gap

Question Type : MCQ

Question ID : 41652912454

Option 1 ID : 41652948627

Option 2 ID : 41652948628

Option 3 ID : 41652948629

Option 4 ID : 41652948626

Status : Answered

4

Q.17 Select the grammatically correct sentence from the following :

Statements :

Options

1. Although that he failed in Mathematics, but he received a degree in Engineering.
 2. Although he had failed in Mathematics, he received a degree in Engineering.
-

3. Although he failed in that Mathematics, but he received a degree in Engineering.

4. Although he had failed in Mathematics, that he received a degree in Engineering.

Question Type : MCQ

Question ID : 41652912459

Option 1 ID : 41652948646

Option 2 ID : 41652948648

Option 3 ID : 41652948649

Option 4 ID : 41652948647

Status : Answered

2

Q.18 Choose the correct part of words to fill in the blanks.

The instructor asked the students to work _____ the given sum in the note book and hand it _____ to him for correction.

Options 1. away, in

1.

2. out, away

2.

3. out, over

3.

4. on, over

4.

Question Type : MCQ

Question ID : 41652912458

Option 1 ID : 41652948645

Option 2 ID : 41652948643

Option 3 ID : 41652948642

Option 4 ID : 41652948644

Status : Answered

4

Q.19 The following sentence is underlined and marked as section A, B, C and D. Show which section contains an error.

As John had taken only a few sips of tea. there was still little tea left in the cup

(A)

(B)

(C)

(D)

Options 1. (D)

1.

2. (C)

3. (A)

4. (B)

Question Type : MCQ

Question ID : 41652912460

Option 1 ID : 41652948653

Option 2 ID : 41652948652

Option 3 ID : 41652948650

Option 4 ID : 41652948651

Status : Answered

2

Q.20 Choose the closest meaning of the proverb/idiom :

To leave someone in the lurch.

Options 1. To leave someone to his/her fate

2. To help someone in difficulties

3. To make someone comfortable

4. To respect someone

Question Type : MCQ

Question ID : 41652912456

Option 1 ID : 41652948636

Option 2 ID : 41652948637

Option 3 ID : 41652948635

Option 4 ID : 41652948634

Status : Answered

1

Q.21 In the following sentence, what does the underlined phrase mean ?

A good teacher is one who sees to it that a student does not waste time in reinventing the wheel.

Options 1. repeating oneself

2. waste time in imaginary things
3. waste time on unnecessary details
4. doing something that has already been done

Question Type : MCQ

Question ID : 41652912461

Option 1 ID : 41652948654

Option 2 ID : 41652948657

Option 3 ID : 41652948655

Option 4 ID : 41652948656

Status : Answered

4

Q.22 A *prima facie* case is :

- Options
1. As it seems to the court after a number of hearings
 2. As it turns out to be at the end
 3. As it is made to seem at first sight
 4. As it seems at first sight

Question Type : MCQ

Question ID : 41652912462

Option 1 ID : 41652948661

Option 2 ID : 41652948660

Option 3 ID : 41652948659

Option 4 ID : 41652948658

Status : Marked For Review

4

Q.23 Choose the correct word that is opposite in meaning to the word :

PACIFY

- Options
1. Discourage
 2. Encourage
-

3. Aggravate

4. Slow down

Question Type : MCQ

Question ID : 41652912453

Option 1 ID : 41652948625

Option 2 ID : 41652948623

Option 3 ID : 41652948624

Option 4 ID : 41652948622

Status : Answered

2

Q.24 From the options given below choose the correct substitute for the underlined word :

Democracy is of the people, by the people and for the people. However, a government run by a few is dangerous for a republic like India.

Options 1. Aristocracy

2. Monarchy

3. Oligarchy

4. Autocracy

Question Type : MCQ

Question ID : 41652912457

Option 1 ID : 41652948640

Option 2 ID : 41652948639

Option 3 ID : 41652948641

Option 4 ID : 41652948638

Status : Answered

1

Q.25 The following are jumbled up parts of a sentence. Rearrange them in a proper sequence :

P : did he realize

Q : helped by a man

R : that he had been

S : he never respected

- Options**
1. SRQP
 2. PQRS
 3. QRPS
 4. PRQS

Question Type : MCQ

Question ID : 41652912455

Option 1 ID : 41652948630

Option 2 ID : 41652948632

Option 3 ID : 41652948631

Option 4 ID : 41652948633

Status : Answered

4

Section : General Awareness

Q.1 Who among the following is not conferred Bharath Ratna ?

- Options**
1. Atal Bihari Vajpayee
 2. Kapil Dev
 3. Sachin Tendulkar
 4. Nelson Mandela

Question Type : MCQ

Question ID : 41652912472

Option 1 ID : 41652948699

Option 2 ID : 41652948701

Option 3 ID : 41652948698

Option 4 ID : 41652948700

Status : Answered

4

Q.2 For which novel did Indian novelist Aravind Adiga win the prestigious Man Booker Prize ?

- Options**
1. The God of Small Things

2. The Inheritance of Loss
3. Midnight's Children
4. The White Tiger

Question Type : MCQ

Question ID : 41652912468

Option 1 ID : 41652948685

Option 2 ID : 41652948682

Option 3 ID : 41652948684

Option 4 ID : 41652948683

Status : Marked For Review

3

Q.3 Which of the following is not mode of online money transfer in India through online banking ?

- Options
1. IFSC
 2. NEFT
 3. RTGS
 4. IMPS

Question Type : MCQ

Question ID : 41652912471

Option 1 ID : 41652948697

Option 2 ID : 41652948694

Option 3 ID : 41652948695

Option 4 ID : 41652948696

Status : Marked For Review

4

Q.4 Which one of the following is credit rating agencies in India ?

- Options
1. SEBI
 2. CARE

3. BARC

4. MIX

Question Type : MCQ

Question ID : 41652912476

Option 1 ID : 41652948715

Option 2 ID : 41652948714

Option 3 ID : 41652948717

Option 4 ID : 41652948716

Status : Answered

2

Q.5 What is the full form of NPCI ?

- Options**
1. National Council Process Interaction
 2. National Public Control of India
 3. National Payments Corporation of India
 4. Nano Center for Political Integration

Question Type : MCQ

Question ID : 41652912474

Option 1 ID : 41652948708

Option 2 ID : 41652948709

Option 3 ID : 41652948707

Option 4 ID : 41652948706

Status : Answered

3

Q.6 Who among the following heads GST council in India ?

- Options**
1. The Finance Minister
 2. The Commerce Minister
 3. The Trade Minister
 4. The Prime Minister
-

Question Type : MCQ

Question ID : 41652912481

Option 1 ID : 41652948735

Option 2 ID : 41652948737

Option 3 ID : 41652948736

Option 4 ID : 41652948734

Status : Answered

1

Q.7 Consider the following statements regarding HEATING AND COOLING OF ATMOSPHERE :

- (1) Convection is important in heating the lower layers of the atmosphere.
- (2) The convection transfer of energy is confined only to the troposphere.
- (3) 'loo' is the outcome of advection process.

Identify the correct statements :

Options

1. (1) and (2) only
2. All (1), (2) and (3) are correct
3. All (1), (2) and (3) are incorrect
4. (2) and (3) only

Question Type : MCQ

Question ID : 41652912486

Option 1 ID : 41652948754

Option 2 ID : 41652948756

Option 3 ID : 41652948757

Option 4 ID : 41652948755

Status : Marked For Review

2

Q.8 Which one of the following waves/rays are used in common T.V. Remote control ?

Options

1. Radio waves
 2. Infrared
 3. Ultrasonic
-

4. **Laser**

4.

Question Type : **MCQ**

Question ID : **41652912483**

Option 1 ID : **41652948742**

Option 2 ID : **41652948744**

Option 3 ID : **41652948745**

Option 4 ID : **41652948743**

Status : **Answered**

2

Q.9 The Chabahar port being developed by India to gain access to Central Asia is located in which of the following countries ?

Options

1. **Oman**

2. **Saudi Arabia**

3. **Iran**

4. **Iraq**

Question Type : **MCQ**

Question ID : **41652912480**

Option 1 ID : **41652948732**

Option 2 ID : **41652948731**

Option 3 ID : **41652948733**

Option 4 ID : **41652948730**

Status : **Answered**

3

Q.10 Debenture holders of a company are its :

Options

1. **Debtors**

2. **Creditors**

3. **Share holders**

4. **Directors**

Question Type : **MCQ**

Question ID : **41652912465**

Option 1 ID : 41652948671
Option 2 ID : 41652948672
Option 3 ID : 41652948670
Option 4 ID : 41652948673

Status : Answered

2

Q.11 The Person behind a wonderful concept 'Van Mahotsav' :

- Options**
1. K.M. Upadhaya
 2. A.K. Munshi
 3. K.M. Munshi
 4. A.K. Simha

Question Type : MCQ

Question ID : 41652912470
Option 1 ID : 41652948690
Option 2 ID : 41652948692
Option 3 ID : 41652948693
Option 4 ID : 41652948691

Status : Marked For Review

3

Q.12 Which country has secured member one spot in the latest FIFA's world rankings released on 25th Oct, 2018 ?

- Options**
1. Argentina
 2. France
 3. Brazil
 4. Belgium

Question Type : MCQ

Question ID : 41652912469
Option 1 ID : 41652948689
Option 2 ID : 41652948686
Option 3 ID : 41652948688
Option 4 ID : 41652948687

Status : Answered

2

Q.13 Consider the following statements regarding ocean currents.

- (1) The heat fishing grounds of the world exist mainly in the mixing zones of warm and cold ocean current
- (2) Gravity is one of the factors influencing ocean currents

Identify the correct statements :

- Options**
1. Both (1) and (2) are incorrect
 2. Both (1) and (2) are correct
 3. (1) only
 4. (2) only

Question Type : MCQ

Question ID : 41652912484

Option 1 ID : 41652948749

Option 2 ID : 41652948748

Option 3 ID : 41652948746

Option 4 ID : 41652948747

Status : Answered

4

Q.14 The first Indian I.T. Company to reach 100 billion dollar market capitalization is :

- Options**
1. Wipro
 2. Cognizant
 3. TCS
 4. Infosys

Question Type : MCQ

Question ID : 41652912478

Option 1 ID : 41652948724

Option 2 ID : 41652948725

Option 3 ID : 41652948723

Option 4 ID : 41652948722

Status : Answered

3

Q.15 Where is the world's highest altitude post office located ?

Options 1. Port Lockroy

2. Sikkim

3. New Hampshire

4. Bern

Question Type : MCQ

Question ID : 41652912485

Option 1 ID : 41652948751

Option 2 ID : 41652948750

Option 3 ID : 41652948753

Option 4 ID : 41652948752

Status : Answered

2

Q.16 The foundation of modern education system in India was laid by :

Options 1. Wood's Despatch of 1854

2. The Hunter Commission of 1882

3. The Charter Act of 1813

4. Macaulay's Minutes of 1835

Question Type : MCQ

Question ID : 41652912487

Option 1 ID : 41652948759

Option 2 ID : 41652948761

Option 3 ID : 41652948760

Option 4 ID : 41652948758

Status : Marked For Review

3

Q.17 The train accident that killed 61 people watching Dussera Celebrations in 2018 happened at which place :

- Options**
1. Patiala
 2. Chennai
 3. Bangalore
 4. Amritsar

Question Type : MCQ

Question ID : 41652912475

Option 1 ID : 41652948711

Option 2 ID : 41652948712

Option 3 ID : 41652948713

Option 4 ID : 41652948710

Status : Answered

4

Q.18 The CRR in banking parlance means the following :

- Options**
1. Corporate Reserve Ratio
 2. Custom Reserve Ratio
 3. Current Reserve Ratio
 4. Cash Reserve Ratio

Question Type : MCQ

Question ID : 41652912479

Option 1 ID : 41652948729

Option 2 ID : 41652948728

Option 3 ID : 41652948726

Option 4 ID : 41652948727

Status : Answered

4

Q.19 Who among the following is NOT associated with billiards in India ?

- Options**
1. Mihir Sen

2. Manoj Kothari
3. Ashok Shandilya
4. Subash Agarwal

Question Type : MCQ

Question ID : 41652912477

Option 1 ID : 41652948719

Option 2 ID : 41652948718

Option 3 ID : 41652948720

Option 4 ID : 41652948721

Status : Marked For Review

4

Q.20 The term 'double fault' is associated with :

- Options
1. Long Jump
 2. Squash
 3. Rugby
 4. Tennis

Question Type : MCQ

Question ID : 41652912467

Option 1 ID : 41652948681

Option 2 ID : 41652948678

Option 3 ID : 41652948679

Option 4 ID : 41652948680

Status : Answered

4

Q.21 The responsibilities of establishing and maintaining astound and efficient Accounting and Financial Reporting system in India is vested in the hands of :

- Options
1. The Comptroller General of Accounts
 2. RBI
-

3. Finance Ministry

4. NITI AYOJ

Question Type : MCQ

Question ID : 41652912482

Option 1 ID : 41652948739

Option 2 ID : 41652948738

Option 3 ID : 41652948741

Option 4 ID : 41652948740

Status : Marked For Review

1

Q.22 India and which country have agreed to undertake the Indus Water Treaty tours in the Indus basin on both sides to resolve issues on the various hydroelectric projects ?

- Options
1. Pakistan
 2. Bangladesh
 3. China
 4. Afghanistan

Question Type : MCQ

Question ID : 41652912464

Option 1 ID : 41652948667

Option 2 ID : 41652948669

Option 3 ID : 41652948668

Option 4 ID : 41652948666

Status : Answered

1

Q.23 The New institution that is now playing the role akin to erst while planning commission of India is :

- Options
1. National Security Council
 2. NITI Aayog
 3. Swacch Bharath Mission
-

Strategic Policy Group

4.

Question Type : MCQ

Question ID : 41652912463

Option 1 ID : 41652948665

Option 2 ID : 41652948662

Option 3 ID : 41652948663

Option 4 ID : 41652948664

Status : Marked For Review

4

Q.24 Which of the following countries is not a member of SAARC ?

Options 1. Myanmar

2. Bhutan

3. Maldives

4. Afghanistan

Question Type : MCQ

Question ID : 41652912466

Option 1 ID : 41652948677

Option 2 ID : 41652948675

Option 3 ID : 41652948676

Option 4 ID : 41652948674

Status : Answered

4

Q.25 The major nation that announced the withdrawal from Paris climate change accord in 2017 was :

Options 1. Spain

2. United States of America

3. Germany

4. Sri Lanka

Question Type : MCQ

Question ID : 41652912473

Option 1 ID : 41652948702

Option 2 ID : 41652948703

Option 3 ID : 41652948705

Option 4 ID : 41652948704

Status : Answered

2

The speeds of 3 cars in the ratio 5 : 4 : 6. The ratio between the time taken by them to travel same distance is :

Answer keys

QuestionID	Correct Option(s)
41652912384	41652948365
41652912385	41652948366
41652912386	41652948371
41652912387	41652948375
41652912388	41652948379
41652912389	41652948382
41652912390	41652948388
41652912391	41652948392
41652912392	41652948394
41652912393	41652948401
41652912394	41652948403
41652912395	41652948407
41652912396	41652948411
41652912397	41652948415
41652912398	Dropped
41652912399	41652948424
41652912400	41652948429
41652912401	41652948433
41652912402	41652948436
41652912403	41652948439
41652912404	41652948444
41652912405	41652948447

41652912406	41652948453
41652912407	41652948454
41652912408	41652948458
41652912409	41652948463
41652912410	41652948467
41652912411	41652948470
41652912412	41652948474
41652912413	41652948479
41652912414	41652948485
41652912415	41652948486
41652912416	41652948493
41652912417	41652948495
41652912418	41652948499
41652912419	41652948503
41652912420	41652948508
41652912421	41652948510
41652912422	41652948514
41652912423	41652948520
41652912424	41652948523
41652912425	41652948527
41652912426	41652948533
41652912427	41652948537
41652912428	41652948539
41652912429	41652948544
41652912430	41652948548
41652912431	41652948550
41652912432	41652948554
41652912433	41652948558
41652912435	41652948564
41652912436	41652948567
41652912437	41652948572
41652912439	41652948576
41652912440	41652948580
41652912441	41652948584
41652912443	41652948589
41652912444	41652948590

41652912445	41652948594
41652912447	41652948598
41652912448	41652948603
41652912449	41652948608
41652912450	41652948613
41652912451	41652948614
41652912452	41652948619
41652912453	41652948624
41652912454	41652948628
41652912455	41652948633
41652912456	41652948636
41652912457	41652948641
41652912458	41652948642
41652912459	41652948648
41652912460	41652948652
41652912461	41652948656
41652912462	41652948658
41652912463	41652948662
41652912464	41652948667
41652912465	41652948672
41652912466	41652948677
41652912467	41652948680
41652912468	41652948683
41652912469	41652948687
41652912470	41652948693
41652912471	41652948697
41652912472	41652948701
41652912473	41652948703
41652912474	41652948707
41652912475	41652948710
41652912476	41652948714
41652912477	41652948719
41652912478	41652948723
41652912479	41652948727
41652912480	41652948733
41652912481	41652948735

41652912482	41652948739
41652912483	41652948744
41652912484	41652948748
41652912485	41652948750
41652912486	41652948756
41652912487	41652948758