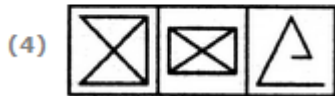
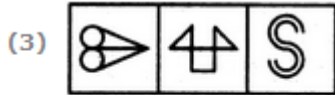


1. Choose the set of figures which follows the given rule.

Rule: Any figure can be traced by a single unbroken line without retracting.



A. 1

B. 2

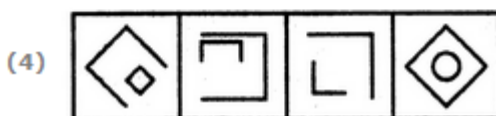
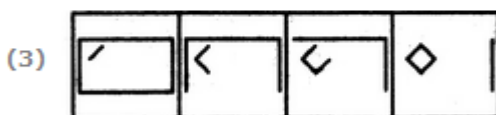
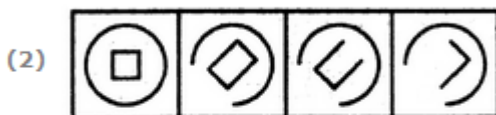
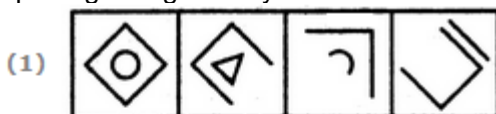
C. 3

D. 4

Answer: B

2. Choose the set of figures which follows the given rule.

Rule: Closed figures gradually become open and open figures gradually become closed.



A. 1

B. 2

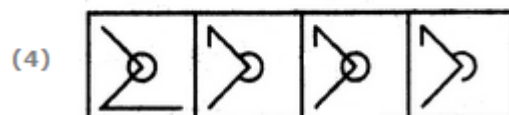
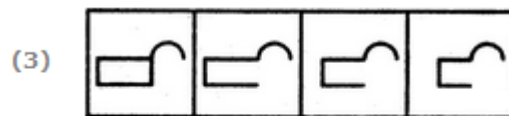
C. 3

D. 4

Answer: C

4. Choose the set of figures which follows the given rule.

Rule: Closed figures become more and more open and open figures become more and more closed.



A. 1

B. 2

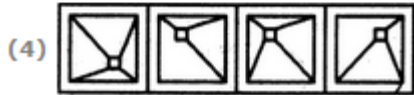
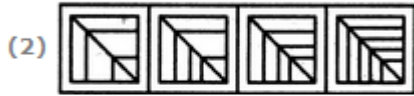
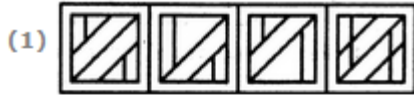
C. 3

D. 4

Answer: A

5. Choose the set of figures which follows the given rule.

Rule: The series becomes complex as it proceeds.



- A. 1
- B. 2
- C. 3
- D. 4

Answer:
B