

To view all objection(s) raised by you, visit "Objection Summary" tab to submit and make payment.

| Question ID | Section | Question | Raise Objection | | |
|----------------------------------|--------------------------------------|---|----------------------------------|--------------------------------------|--|
| 202871 | LOGICAL REASONING | <p>Select the option that is related to the third word in the same way as the second word is related to the first word:</p> <p>Currency: Inflation :: Metal : ?</p> <p>311991 Hunger</p> <p>311992 Disease</p> <p>311993 Rust</p> <p>311994 Fuel</p> <p>311995 Recycling</p> <table border="1" data-bbox="518 1574 1232 1704"> <tr> <td data-bbox="518 1574 842 1704">Correct Option: 311993</td> <td data-bbox="842 1574 1232 1704">Candidate Response: 311993</td> </tr> </table> | Correct Option: 311993 | Candidate Response: 311993 | |
| Correct Option: 311993 | Candidate Response: 311993 | | | | |
| 202872 | LOGICAL REASONING | <p>Choose the analogy that best matches the example provided:</p> <p>Potter : Vase</p> <p>A) Author : Idea B) Carpenter : Chair C) Painter : Brush D) Chef : Recipe E) Sculptor : Marble</p> | | | |

311996

A

311997

B

311998

C

311999

D

312000

E

Correct Option:

311997

Candidate Response:

311997

202873

LOGICAL
REASONING

Select the option that completes the number analogy.

18 : 441 :: 21 : 576 :: 24 : ?

312001

564

312002

478

312003

729

312004

446

312005

676

Correct Option:

312003

Candidate Response:

312001

202874

LOGICAL
REASONING

Select the option in which the numbers follow the same relationship as in the given set.

40 : 49 : 22

312006

31 : 41 : 21

312007

35 : 47 : 28

312008

45 : 56 : 22

312009

27 : 37 : 12

312010

42 : 51 : 24

Correct Option:

312010

Candidate Response:

312006

202875

LOGICAL
REASONING

Select the option that is related to the third word in the same way as the second word is related to the first word:

Democracy : Ballot :: Monarchy : ?

312011

Justice

312012

Charity

312013

Help

312014

Crown

312015

Borrow

Correct Option:

312014

Candidate Response:

312014

202876

LOGICAL
REASONING

In the following question, find the odd letters/group from the given alternatives.

A) WTYX

B) KHML

C) PMRQ

D) GDIH

E) TPWU

312016

A

312017

B

312018

C

312019

D

312020

E

Correct Option:

312020

Candidate Response:

312020

| | | | | | |
|----------------------------------|--------------------------------------|---|----------------------------------|--------------------------------------|--|
| 202877 | LOGICAL REASONING | <p>Find the odd one out:</p> <p>A) Inch B) Foot C) Yard D) Mile E) Acre</p> <p>312021 A</p> <p>312022 B</p> <p>312023 C</p> <p>312024 D</p> <p>312025 E</p> <table border="1" data-bbox="518 1391 1230 1518"><tr><td>Correct Option: 312025</td><td>Candidate Response: 312025</td></tr></table> | Correct Option: 312025 | Candidate Response: 312025 | |
| Correct Option: 312025 | Candidate Response: 312025 | | | | |
| 202878 | LOGICAL REASONING | <p>Which pair does NOT belong with the others?</p> <p>A. 12 – 84 B. 36 – 62 C. 48 – 72 D. 84 – 96 E. 24 – 48</p> <p>312026 A</p> | | | |

312027

B

312028

C

312029

D

312030

E

Correct Option:

312027

Candidate Response:

312027

202879

LOGICAL
REASONING

Choose the number which is DIFFERENT from the rest?

A. 3727

B. 4668

C. 5847

D. 5364

E. 6745

312031

A

312032

B

312033

C

312034

D

312035

E

Correct Option:

312031

Candidate Response:

312031

202880

LOGICAL
REASONING

Rajesh walks 15 km towards North. He turns right and walks another 15 km. He turns right and walks another 15 km. In which direction is he with respect to the starting point?

312036

North

312037

North-west

312038

West

312039

South

312040

East

Correct Option:

312040

Candidate Response:

312040

202881

LOGICAL
REASONING

Find the odd one out:

17, 19, 23, 29, 31

312041 17

312042 19

312043 23

312044 29

312045 31

Correct Option:
312045

Candidate Response:
312043

202882

LOGICAL
REASONING

Find the missing number in the series:

11, 19, 31, 43, __, 71

312046 47

312047 53

312048 59

312049 71

312050

67

Correct Option:

312048

Candidate Response:

312046

202883

LOGICAL
REASONING

Complete the series

1, 2, 6, 24, 120, ?

312051

720

312052

600

312053

687

312054

268

312055

432

Correct Option:

312051

Candidate Response:

312051

202884

LOGICAL
REASONING

Complete the series

2 Z 5, 7 Y 7, 14 X 9, 23 W 11, 34 V 13, ?

312056

37 Y 16

312057

47 U 15

312058

40 H 12

312059

45 U 17

312060

43 X 14

Correct Option:

312057

Candidate Response:

312057

202885

LOGICAL
REASONING

What comes next in the series:

50, B, 210, F, 380, J, 460, .., ...?

312061

H, 510

312062

Q, 500

312063

V, 480

312064

N, 550

312065

U, 525

Correct Option:

312064

Candidate Response:

312064

202886

LOGICAL
REASONING

Find the missing number in the series:

94, 99, 108, 119, 130, ?, 144

312066

128

312067

135

312068

139

312069

140

312070

132

Correct Option:

312068

Candidate Response:

312067

202887

LOGICAL
REASONING

Ram is facing west. He turns 45° clockwise, 135° counter clockwise, and 135° counter clockwise again. Which direction is he now facing?

312071

| | | | | | |
|----------------------------------|--------------------------------------|--|----------------------------------|--------------------------------------|--|
| | | <p>North-West.</p> <p>312072 North-East</p> <p>312073 South-East</p> <p>312074 South-West</p> <p>312075 South</p> <table border="1"> <tr> <td>Correct Option: 312072</td> <td>Candidate Response: 312071</td> </tr> </table> | Correct Option: 312072 | Candidate Response: 312071 | |
| Correct Option: 312072 | Candidate Response: 312071 | | | | |
| 202888 | LOGICAL REASONING | <p>A person facing South-West turns and faces East. In the same way, if a person facing North-East turns, which direction will she face?</p> <p>312076 South</p> <p>312077 East</p> <p>312078 West</p> <p>312079 North</p> | | | |

| | | | | | |
|----------------------------------|--------------------------------------|---|----------------------------------|--------------------------------------|--|
| | | <p>312080</p> <p style="text-align: right;">North-West</p> <table border="1" style="width: 100%;"> <tr> <td style="width: 50%;">Correct Option: 312078</td> <td style="width: 50%;">Candidate Response: 312078</td> </tr> </table> | Correct Option: 312078 | Candidate Response: 312078 | |
| Correct Option: 312078 | Candidate Response: 312078 | | | | |
| 202889 | LOGICAL REASONING | <p>Maresh is facing North and walks 10kms. He turns 270° anti-clockwise and walks 15kms. Now, he again turns 45° clockwise and walks for 25kms. Which direction is he facing now?</p> <p>312081</p> <p style="text-align: right;">North-east</p> <p>312082</p> <p style="text-align: right;">South-east</p> <p>312083</p> <p style="text-align: right;">South-west</p> <p>312084</p> <p style="text-align: right;">North-west</p> <p>312085</p> <p style="text-align: right;">South</p> <table border="1" style="width: 100%;"> <tr> <td style="width: 50%;">Correct Option: 312082</td> <td style="width: 50%;">Candidate Response: 312082</td> </tr> </table> | Correct Option: 312082 | Candidate Response: 312082 | |
| Correct Option: 312082 | Candidate Response: 312082 | | | | |
| 202890 | LOGICAL REASONING | <p>Rohit starts from a point A and travels 3 km eastwards to B and then turns left and travels thrice that distance to reach C. He again turns left and travels five times the distance he covered between A and B and reaches his destination D. What is the shortest distance between the starting point and the destination ?</p> | | | |

312086

15 km

312087

20 km

312088

25 km

312089

18 km

312090

19 km

Correct Option:

312086

Candidate Response:

312086

202891

LOGICAL
REASONING

Savita is mother-in-law of Eashita who is sister-in-law of Aniket. Pranjali is father of Sanjeev, the only brother of Aniket. How is Savita related to Aniket?

312091

Mother

312092

Mother-in-law

312093

Daughter

312094

Sister

| | | | | | |
|----------------------------------|--------------------------------------|---|----------------------------------|--------------------------------------|--|
| | | <p>312095</p> <p style="text-align: right;">Niece</p> <table border="1" style="width: 100%;"> <tr> <td style="width: 50%;">Correct Option: 312091</td> <td style="width: 50%;">Candidate Response: 312091</td> </tr> </table> | Correct Option: 312091 | Candidate Response: 312091 | |
| Correct Option: 312091 | Candidate Response: 312091 | | | | |
| 202892 | LOGICAL REASONING | <p>If Aruna is the sister of Babita, Babita is the daughter of Chitra, and Chitra is the wife of Dinesh, how is Dinesh related to Aruna?</p> <p>312096</p> <p style="text-align: right;">Uncle</p> <p>312097</p> <p style="text-align: right;">Son-in-law</p> <p>312098</p> <p style="text-align: right;">Father-in-law</p> <p>312099</p> <p style="text-align: right;">Father</p> <p>312100</p> <p style="text-align: right;">Nephew</p> <table border="1" style="width: 100%;"> <tr> <td style="width: 50%;">Correct Option: 312099</td> <td style="width: 50%;">Candidate Response: 312099</td> </tr> </table> | Correct Option: 312099 | Candidate Response: 312099 | |
| Correct Option: 312099 | Candidate Response: 312099 | | | | |
| 202893 | LOGICAL REASONING | <p>Looking at the photo of a man. David said, "His mother is the wife of my father's son. Brothers and sisters I have none". Whose photo was David looking at?</p> | | | |

312101

His uncle

312102

His nephew

312103

His son

312104

His cousin

312105

His Father-in-law

Correct Option:

312103

Candidate Response:

312103

202894

LOGICAL
REASONING

Pointing to Tanya, a woman says,
"She is the daughter of the only brother of the only daughter of my father."
How is Tanya related to the woman?

312106

Mother

312107

Sister

312108

Niece

In a single row of 54 persons, Manoj is seated 35th from the left end and Suraj is seated 22nd from the right end. How many persons are seated between Manoj and Suraj?

312116

4

312117

6

312118

2

312119

5

312120

1

Correct Option:

312120

Candidate Response:

312120

202897

LOGICAL
REASONING

In these question, relationship between different elements is shown in the statements. Some statements are followed by some conclusions. Choose the correct answer on the basis of information given below.

Statements:

I: $H \geq V = O > R$

II: $X \leq D > Y > R$

III: $Y > N = L < Z$

Conclusions:

I. $O < D$

II. $R > N$

A. Neither conclusion I nor II follows.

B. Only conclusion I follows.

C. Both conclusions I and II follow.

D. Only conclusion II follows.

E. Either conclusion I or II follows.

312121

A

312122

B

312123

C

312124

D

312125

E

Correct Option:

312121

Candidate Response:

312121

202898

LOGICAL
REASONING

The digits of the number 694128573 are rearranged in ascending order within the number.
How many digits will remain in their original positions after the rearrangement?

312126 0

312127 3

312128 1

312129 4

312130 5

Correct Option:

312126

Candidate Response:

312126

202899

LOGICAL
REASONING

There are 25 persons in a row.
Rahul is 10th from the left.
Five persons sitting to the left of Rahul leave the row.
What is Rahul's new position from the right end?

312131 17th

312132 9th

312133

16th

312134

11th

312135

7th

Correct Option:

312133

Candidate Response:

312133

202900

LOGICAL
REASONING

Three persons Amey, Bhavan and Charan are standing in a queue. There are 5 people between Amey and Bhavan and 8 people between Bhavan and Charan. If there are three people ahead of Charan and 21 people behind Amey, then what could be the minimum number of persons in the queue?

312136

38

312137

35

312138

23

312139

32

312140

28

Correct Option:

312140

Candidate Response:

312140

202901

LOGICAL
REASONING

In the word "**ANALYTICS**":

- Letters at odd positions are changed to the letter two steps forward in the English alphabetical series,
- Letters at even positions are changed to the letter one step backward in the English alphabetical series,
- After this change, the letters at positions which are perfect squares are interchanged with the letters immediately following them.

After performing all the above operations, determine the alphabets that shall appear between the third and the seventh alphabets of the newly formed word, when compared to the alphabets that appear in an ordinary English dictionary.

312141

8

312142

5

312143

7

312144

9

312145

4

Correct Option:

312143

Candidate Response:

312141

202902

LOGICAL
REASONING

If all the alphabets of the word UNIDENTIFIED are arranged in an alphabetical order, then the position of how many alphabets shall remain unchanged in the newly formed word?

312146 3

312147 2

312148 1

312149 4

312150 5

Correct Option:
312148

Candidate Response:
312148

202903

LOGICAL
REASONING

If in the word SEPTUAGENARIAN first three and then next three letters are written in reverse order and the rest of the letters are written as they appear in English alphabet, the positions of how many letters get changed in the new arrangement?

312151 10

312152 8

312153 9

312154

11

312155

12

Correct Option:

312155

Candidate Response:

312151

202904

LOGICAL
REASONING

Each consonant of the word "**EDUCATION**" is changed to the next alphabet in the English alphabet and each vowel is changed to the previous alphabet.
If the new alphabets are arranged in alphabetical order, which alphabet will be the 4th from the left end?

312156

N

312157

U

312158

H

312159

E

312160

O

Correct Option:

312158

Candidate Response:

312158

| | | | | | |
|----------------------------------|--------------------------------------|---|----------------------------------|--------------------------------------|--|
| 202905 | LOGICAL REASONING | <p>How many meaningful four letter English word (s) can be formed by using the first and fifth alphabet of the word BARBER along with the second and sixth alphabet of the word PARKING, such that each alphabet gets used at least once in the newly formed word (s)?</p> <p>312161 3</p> <p>312162 1</p> <p>312163 4</p> <p>312164 2</p> <p>312165 5</p> <table border="1" style="width: 100%; margin-top: 20px;"> <tr> <td style="width: 50%;">Correct Option: 312164</td> <td style="width: 50%;">Candidate Response: 312162</td> </tr> </table> | Correct Option: 312164 | Candidate Response: 312162 | |
| Correct Option: 312164 | Candidate Response: 312162 | | | | |
| 202906 | LOGICAL REASONING | <p>If MONKEY → PRQOACY, how will ELEPHANT be coded in the same language?</p> <p>312166 HTGQGGLW</p> | | | |

312167

HQGTGGLW

312168

HGQTGGLW

312169

HQGTGQWL

312170

HTGQGGWL

Correct Option:

312167

Candidate Response:

312169

202907

LOGICAL
REASONING

A puzzle club assigns unique codes to animals. For instance, HORSE is represented as **1620363810**. What code would they assign to RHINOCEROS?

312171

6316142820160362028

312172

3616182824610352038

312173

3616142820610362038

312174

5616162821610762038

312175

3686142870610364038

Correct Option:

312173

Candidate Response:

312173

202908

LOGICAL
REASONING

If **BRIGHT** = 150, then **SHADOW** = ?

312176

195

312177

251

312178

243.5

312179

201.5

312180

212.8

Correct Option:

312179

Candidate Response:

312178

202909

LOGICAL
REASONING

In a certain code, 'GONE' is written as 5 % 2 # and 'MEDAL' is written as 4 # 3 \$ @, then how will 'GOLD' be written in that code?

312181

5 @ % 3

312182

5 % @ 3

312183

5 # @ 3

312184

5 % # 3

312185

5 # % 3

Correct Option:

312182

Candidate Response:

312182

202910

LOGICAL
REASONING

If PLANET is coded as NKYBVR and GARDEN is coded as EZNVBK, what will MARKET be coded as?

312186

KZNVQX

312187

KZNCVQ

312188

KZNVPR

312189

KZNYCQ

312190

KZEARQ

Correct Option:

312187

Candidate Response:

312186

202911

LOGICAL
REASONING

There are 200 students in a particular class. 50% students play cricket, 20% student play football and 10% students play both the games. What is the number of students who play neither cricket nor football?

312191

150

312192

130

312193

80

312194

135

312195

140

Correct Option:

312193

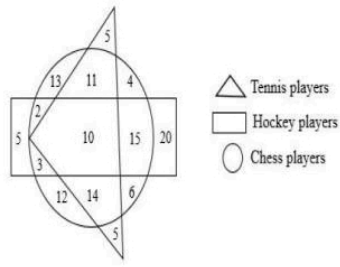
Candidate Response:

312193

202912

LOGICAL
REASONING

Study the Diagram shown below carefully and answer the question that follows :



How many tennis players are not hockey players?

312196

35

312197

56

312198

37

312199

29

312200

45

Correct Option:

312196

Candidate Response:

312196

202913

LOGICAL
REASONING

From a supermarket, 15 customers bought orange, 15 bought watermelon, 20 bought blueberry, 2 bought all the three fruits and 8 bought at least two of these. How many bought at least one fruit from the supermarket?

312201

43

312202

42

312203

38

312204

40

312205

45

Correct Option:

312204

Candidate Response:

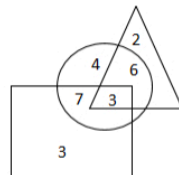
312202

202914

LOGICAL
REASONING

In the given Venn diagram, the 'circle' represents the number of students passing in maths, the 'triangle' represents the number of students passing in science, and the 'rectangle' represents the number of students passing in history.

Identify the number of students passing in science only in the given diagram :



312206

6

312207

2

312208

3

| | | | | | |
|----------------------------------|--------------------------------------|--|----------------------------------|--------------------------------------|--|
| | | 312209 | 7 | | |
| | | 312210 | 4 | | |
| | | <table border="1"> <tr> <td>Correct Option: 312207</td> <td>Candidate Response: 312207</td> </tr> </table> | Correct Option: 312207 | Candidate Response: 312207 | |
| Correct Option: 312207 | Candidate Response: 312207 | | | | |
| 202915 | LOGICAL REASONING | <p>Out of the 100 players, 20 people love only football, 30 people love both football and hockey, 15 people love only cricket, 25 people love only hockey, 5 people love both football and cricket and the remaining love only basketball. How many players like football?</p> | | | |
| | | 312211 | 35 | | |
| | | 312212 | 20 | | |
| | | 312213 | 25 | | |
| | | 312214 | 55 | | |
| | | 312215 | 60 | | |
| | | <table border="1"> <tr> <td>Correct Option: 312214</td> <td>Candidate Response: 312214</td> </tr> </table> | Correct Option: 312214 | Candidate Response: 312214 | |
| Correct Option: 312214 | Candidate Response: 312214 | | | | |

| | | | | | |
|----------------------------------|--------------------------------------|--|----------------------------------|--------------------------------------|--|
| 202916 | LOGICAL REASONING | <p>Lata is elder than Meera. Lalita is elder than Meera but younger than Lata. Lila is younger than both Meera and Hema but Hema is younger than Meera. Who is the youngest?</p> <p>312216 Lata</p> <p>312217 Lalita</p> <p>312218 Hema</p> <p>312219 Lila</p> <p>312220 Meera</p> <table border="1" data-bbox="518 1288 1230 1417"> <tr> <td data-bbox="518 1288 841 1417">Correct Option: 312219</td> <td data-bbox="841 1288 1230 1417">Candidate Response: 312219</td> </tr> </table> | Correct Option: 312219 | Candidate Response: 312219 | |
| Correct Option: 312219 | Candidate Response: 312219 | | | | |
| 202917 | LOGICAL REASONING | <p>Priya scored more than Raju, Yamini scored as much as Diya. Laxmi scored less than Manisha. Raju scored more than Yamini. Manisha scored less than Diya. Who scored the lowest?</p> <p>312221 Laxmi</p> <p>312222 Raju</p> <p>312223</p> | | | |

Manisha

312224

Yamini

312225

Diya

Correct Option:

312221

Candidate Response:

312221

202918

LOGICAL
REASONING

Read the given information and answer the question given below carefully.

Eight people named from A to H sit along a straight row and are facing north direction. Less than two people sit to the left of H. G sits in the middle of H and F but is not an immediate neighbour of either of the two. C sits second to the right of B, who is an immediate neighbour of H. D sits immediately between F and A. E is neither an immediate neighbour of G nor of A.

How many people sit(s) to the left of G?

312226

1

312227

2

312228

3

312229

4

312230

5

Correct Option:

312228

Candidate Response:

312226

202919

LOGICAL
REASONING

Five girls are sitting on a bench to be photographed, all facing North. Kajal is to the left of Aakansha. Divya is to the right of Aakansha. Anita is between Aakansha and Divya. Lila is to the left of Kajal. Who would be third from the right in the photograph?

312231

Lila

312232

Divya

312233

Aakansha

312234

Anita

312235

Kajal

Correct Option:

312233

Candidate Response:

312233

202920

LOGICAL
REASONING

There are six persons sitting in a row facing north. Ajit is sitting towards immediate left of Bhola and immediate right of Chetan. Chetan is sitting to immediate right of Firoj. Dilip is immediate right of Eknath who is to the left of Firoj, then which two people are sitting in the center?

312236

Dilip and Bhola

312237

Ajit and Bhola

312238

Firoj and Chetan

312239

Eknath and Dilip

312240

Dilip and Chetan

Correct Option:

312238

Candidate Response:

312236

202921

LOGICAL
REASONING

Study the following information carefully and answer the given question:

A word and number arrangement device when given an input line of words and numbers rearranges them following a particular pattern in each step. The following is an illustration of input and rearrangement.

Input: 18 Quickly Teacher Pacer 40 28 86 Heaven

Step 1: Heave Quickl Teache Pace 40 28 86 18

Step 2: Heave 18 Quickl Teache Pace 40 28 86

Step 3: Heav 18 Pac 28 Quick Teach 40 86

Step 4: Hea 18 Pa 28 Quic 40 Teac 86

Step 5: He 18 P 28 Qui 40 Tea 86

And Step 5 is the last step of the above input.

As per the pattern followed in the above steps, find out in each of the following questions the appropriate step for the given input.

Input: 20 Quicker towel Parker 41 29 87 Harness

Which of the following will be the last step of the rearrangement?

312241

3

312242

4

312243

5

312244

6

312245

7

Correct Option:

312243

Candidate Response:

312241

202922

LOGICAL
REASONING

Read the information carefully and answer the question given below.

A word arrangement machine when given an input of words, rearranges them by following a particular rule in each step. The following is an illustration of input and steps rearrangement.

Input: 9 cat box 2 65 solve 47 when

Step 1: 65 9 cat box 2 solve 47 when

Step 2: 65 box 9 cat 2 solve 47 when

Step 3: 65 box 47 9 cat 2 solve when

Step 4: 65 box 47 cat 9 2 solve when

Step 5: 65 box 47 cat 9 solve 2 when

This is the final arrangement and Step 5 is the last step.

As per the rules followed in the given input, answer the question given below for the following input.

INPUT: denizen 41 denial 18 28 denitrify 5 63 denim denigrate

What is the difference between 80 and the number which is fourth from right end in step 5?

312246

67

312247

77

312248

65

312249

80

312250

Correct Option:

312250

Candidate Response:

312246

202923

LOGICAL
REASONING

Study the following information carefully and answer the given question:

A word and number arrangement machine when given an input line of words and numbers, rearranges them following a particular rule in each step. The following is an illustration of input and rearrangement. (All the numbers are two digit numbers).

Input: monk 79 bill rock 34 73 hole 80 sand fog 22 jam 60 99

Step I: sand 99 monk 79 bill rock 34 73 hole 80 fog 22 jam 60

Step II: sand rock 99 80 monk 79 bill 34 73 hole fog 22 jam 60

Step III: sand rock monk 99 80 79 bill 34 73 hole fog 22 jam 60

Step IV: sand rock monk 99 80 79 jam 73 bill 34 hole fog 22 60

Step V: sand rock monk 99 80 79 jam hole 73 60 bill 34 fog 22

Step VI: sand rock monk 99 80 79 jam hole fog 73 60 34 bill 22

And Step VI is the last step of the above input, as the desired arrangement is obtained.

As per the followed in the above steps, find out in each of the following questions the appropriate step for the given input.

Input: 23 mat belt 50 car 36 73 hay 66 owl 40 sell fool 47

How many elements (words or numbers) are there between '50' and '36' in the sixth step?

312251

Three

312252

Four

312253

Two

312254

Five

312255

one

Correct Option:

312254

Candidate Response:

312251

202924

LOGICAL
REASONING

Study the following information carefully and answer the given question:
A word and number arrangement machine when given an input line of words and numbers, rearranges them following a particular rule in each step. The following is an illustration of input and rearrangement. (All the numbers are two digit numbers).

Input: monk 79 bill rock 34 73 hole 80 sand fog 22 jam 60 99

Step I: sand 99 monk 79 bill rock 34 73 hole 80 fog 22 jam 60

Step II: sand rock 99 80 monk 79 bill 34 73 hole fog 22 jam 60

Step III: sand rock monk 99 80 79 bill 34 73 hole fog 22 jam 60

Step IV: sand rock monk 99 80 79 jam 73 bill 34 hole fog 22 60

Step V: sand rock monk 99 80 79 jam hole 73 60 bill 34 fog 22

Step VI: sand rock monk 99 80 79 jam hole fog 73 60 34 bill 22

And Step VI is the last step of the above input, as the desired arrangement is obtained.

As per the followed in the above steps, find out in each of the following questions the appropriate step for the given input.

Input: 23 mat belt 50 car 36 73 hay 66 owl 40 sell fool 47

In which step are '47 23 belt car' found in same order?

312256

2

312257

3

312258

4

312259

5

312260

6

Correct Option:

312258

Candidate Response:

312256

| | | | | | |
|----------------------------------|--------------------------------------|---|----------------------------------|--------------------------------------|--|
| 202925 | LOGICAL REASONING | <p>Study the following information and answer the question given below: An alphabetical machine, when given an input of words rearranges them following a particular rule in each step. The following is an illustration of input and step of rearrangement. INPUT: COVER LAYER MINIMUM CONTROL AMAZE UNIQUE INITIAL ENTER FINAL EXIT Step I: COVER LAYER MINIMUM CONTROL AMAZE INITIAL ENTER FINAL Step II: COVER LAYER MINIMUM CONTROL FINAL Step III: CONTROL COVER FINAL LAYER MINIMUM Step IV: COVER FINAL LAYER CONTROL MINIMUM Step IV is the final step of the arrangement.</p> <p>As per the followed in the above steps, find out in each of the following questions the appropriate step for the given input.</p> <p>INPUT: FILES GRADE INSIDE AWARE ADVANCE PAIRS FOREIGN ALTER OVER TOWARDS Which word is given between the words FOREIGN and TOWARDS in step I?</p> <p>312261 ALTER</p> <p>312262 ADVANCE</p> <p>312263 AWARE</p> <p>312264 GRADE</p> <p>312265 CONTROL</p> <table border="1" data-bbox="518 1691 1230 1821"> <tr> <td>Correct Option: 312261</td> <td>Candidate Response: 312261</td> </tr> </table> | Correct Option: 312261 | Candidate Response: 312261 | |
| Correct Option: 312261 | Candidate Response: 312261 | | | | |
| 202926 | LOGICAL REASONING | <p>Study the following arrangement carefully and answer the question given below 6 R 0 T 4 A 8 % B F 1 E # W @ 9 H I \$ M N * 3 2 V \$ 5 G P 7 Q</p> <p>If all the symbols are eliminated from the above arrangement, than which of the following will be the 5th to the right of 10th element from the right end?</p> | | | |

312266

5

312267

V

312268

4

312269

A

312270

G

Correct Option:

312266

Candidate Response:

312266

202927

LOGICAL
REASONING

Study the following sequence carefully. Perform the swap as described below and answer the question.

Sequence:

P 3 Q % R 5 S \$ T 7 U & V 9 W # X 2 Y @ Z

Instruction:

All symbols immediately followed by consonants interchange positions with that consonant.

Question:

Which element is 6th from the left after performing the swaps?

312271

S

312272

\$

312273

U

312274

5

312275

@

Correct Option:

312274

Candidate Response:

312274

202928

LOGICAL
REASONING

In the given sequence, certain pairs of elements are interchanged as shown. After performing all interchanges, find the required element.

Sequence:

A 7 B % C 3 D & E 9 F \$ G 2 H #

Swaps:

A ↔ 7, B ↔ %, C ↔ 3, D ↔ &, E ↔ 9, F ↔ \$, G ↔ 2, H ↔ #

Question:

Which element will be 12th from the left after all interchanges?

312276

E

312277

D

312278

\$

312279

F

312280

C

Correct Option:

312279

Candidate Response:

312279

202929

LOGICAL
REASONING

Study the following arrangement carefully and answer the question given below:

W 1 R % 4 J E # 7 M 2 I 9 B H 3 A \$ 9 F Q 5 G 6 U S P

Which of the following is the eighth to the right of the eighteenth from the right end?

312281

A

312282

E

312283

\$

312284

#

312285

U

Correct Option:

312283

Candidate Response:

312283

202930

LOGICAL
REASONING

Study the following arrangement carefully and answer the question that follows.

7 A M 4 E 9 U B 6 T A 3 C E 8 M U 5 B A 2 E T 9 C M U

If all the vowels and even numbers are dropped from the above arrangement, which of the following will be the 10th from the left end of the remaining arrangement?

312286

B

312287

C

312288

M

312289

T

312290

5

Correct Option:

312286

Candidate Response:

312286

202931

LOGICAL
REASONING

Arrange the given words in logical and meaningful sequence:

1. Hecto
2. Centi
3. Deca
4. Kilo
5. Deci

312291

1,3,4,5,2

312292

1,5,3,4,2

312293

2,5,3,1,4

312294

5,2,1,4,3

312295

1,4,5,3,2

Correct Option:

312293

Candidate Response:

312294

202932

LOGICAL
REASONING

If the following five words are arranged in alphabetical order, then which word will come in the middle ?

- (a) Electric
- (b) Elector
- (c) Electrode
- (d) Elect
- (e) Electron

312296

a

312297

b

312298

c

312299

d

312300

e

Correct Option:

312296

Candidate Response:

312296

202933

LOGICAL
REASONING

Arrange the following in a logical order:

1. Millennium 2. Diamond Jubilee 3. Silver Jubilee 4. Centenary 5. Golden Jubilee

312301

2, 3, 5, 4, 1

312302

3, 2, 4, 1, 5

312303

3, 5, 2, 4, 1

312304

3, 1, 5, 2, 4

312305

2, 4, 1, 3, 5

Correct Option:

312303

Candidate Response:

312303

| | | | | | |
|----------------------------------|--------------------------------------|--|----------------------------------|--------------------------------------|--|
| 202934 | LOGICAL REASONING | <p>Arrange the following in a logical order:</p> <ol style="list-style-type: none"> 1. Never 2. Sometimes 3. Generally 4. Seldom 5. Always <p>312306</p> <p style="text-align: right;">5, 2, 1, 3, 4</p> <p>312307</p> <p style="text-align: right;">5, 2, 4, 1, 3</p> <p>312308</p> <p style="text-align: right;">5, 3, 2, 1, 4</p> <p>312309</p> <p style="text-align: right;">5, 3, 2, 4, 1</p> <p>312310</p> <p style="text-align: right;">5, 2, 4, 3, 1</p> <table border="1" style="width: 100%; border-collapse: collapse;"> <tr> <td style="padding: 5px;">Correct Option: 312309</td> <td style="padding: 5px;">Candidate Response: 312309</td> </tr> </table> | Correct Option: 312309 | Candidate Response: 312309 | |
| Correct Option: 312309 | Candidate Response: 312309 | | | | |
| 202935 | LOGICAL REASONING | <p>Arrange the following steps involved in policy formulation and implementation in the correct chronological order.</p> <ol style="list-style-type: none"> A. Monitoring and evaluation B. Identification of public problem C. Policy approval by authority D. Policy design and drafting E. Policy impact assessment F. Stakeholder consultation G. Policy implementation <p>312311</p> | | | |

B → F → D → C → G → A → E

312312

B → D → F → C → G → A → E

312313

B → F → C → D → G → A → E

312314

B → D → C → F → G → A → E

312315

F → B → D → C → G → A → E

Correct Option:

312311

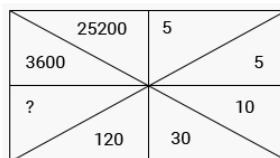
Candidate Response:

312311

202936

LOGICAL
REASONING

Insert the missing number in the figure given below



312316

600

312317

400

312318

360

312319

500

312320

550

Correct Option:

312316

Candidate Response:

312316

202937

LOGICAL
REASONING

Insert the missing number in the figure given below

| | | |
|----|----|----|
| 7 | 22 | 5 |
| 5 | 9 | 11 |
| 9 | 11 | 15 |
| 38 | 77 | ? |

312321

200

312322

180

312323

190

312324

150

312325

160

Correct Option:

312325

Candidate Response:

312321

202938

LOGICAL
REASONING

Insert the missing number in the following question?

| | | | | |
|---|---|---|---|----|
| 4 | 5 | 3 | 2 | 0 |
| 7 | 3 | 4 | 4 | 21 |
| 6 | 4 | 4 | 5 | 22 |
| 9 | 6 | 5 | 5 | ? |

312326

34

312327

42

312328

44

312329

45

312330

38

Correct Option:

312326

Candidate Response:

312326

202939

LOGICAL
REASONING

Insert the missing number in the following question.

| | | |
|------|------|------|
| 18 | 12 | ? |
| / \ | / \ | / \ |
| / \ | / \ | / \ |
| 24 6 | 16 3 | 20 5 |
| \ / | \ / | \ / |
| \ / | \ / | \ / |
| 8 | 4 | 5 |

312331

25

312332

35

312333

64

312334

20

312335

56

Correct Option:

312334

Candidate Response:

312332

202940

LOGICAL
REASONING

Insert the missing number in the following question

| | | |
|-----|----|----|
| 72 | 24 | 6 |
| 96 | 16 | 12 |
| 108 | ? | 18 |

312336

18

312337

20

312338

16

312339

12

312340

22

Correct Option:

312339

Candidate Response:

312340

202941

LOGICAL
REASONING

In question below are given two statements followed by two conclusions numbered I and II. You have to take the given two statements to be true even if they seem to be at variance from commonly known facts. Read the conclusion and then decide which of the given conclusions logically follows from the two given statements, disregarding commonly known facts.

Give answer:

- (A) If only conclusion I follows
- (B) If only conclusion II follows
- (C) If either I or II follows
- (D) If neither I nor II follows and
- (E) If both I and II follow.

Statements: All young scientists are open-minded.

No open-minded men are superstitious.

Conclusions:

1. No scientist is superstitious.
2. No young people are superstitious.

312341

A

312342

B

312343

C

312344

D

312345

E

Correct Option:

312344

Candidate Response:

312344

202942

LOGICAL
REASONING

In question below two statements are given followed by two conclusions numbered I and II. You have to take the given two statements to be true even if they seem to be at variance from commonly known facts. Read the conclusion and then decide which of the given conclusions logically follows from the two given statements, disregarding commonly known facts.

Give answer:

- (A) If only conclusion I follows
- (B) If only conclusion II follows
- (C) If either I or II follows
- (D) If neither I nor II follows and
- (E) If both I and II follow.

Statements: Raman is always successful.

No fool is always successful.

Conclusions:

1. **Raman is a fool.**
2. **Raman is not a fool.**

312346

A

312347

B

312348

C

312349

D

312350

E

Correct Option:

312347

Candidate Response:

312347

202943

LOGICAL
REASONING

The question below consists of a question and three statements numbered I, II and III given below it. You have to decide whether the data provided in the statements are sufficient to answer the question. Read all the statements and give answer:

Question : In a family there are 5 members, Nidhi, Vidhi, Nitya, Ajay and Anil. Find the present age of Anil.

Statement :

I. The average age of five family members is 36 years.

II. The total age of Nidhi, Vidhi and Anil is 75 years.

III. The present age of Anil is 12 years more than the age of Ajay.

A. The data in statements I alone is sufficient to answer the question, while the data in statement II and III is not sufficient to answer the question.

B. The data in statements II and III is sufficient to answer the question, while the data in statement I is not sufficient to answer the question.

C. The data in statements I and II or in statement II and III is sufficient to answer the question.

D. The data in all the statements I, II and III is not sufficient to answer the question.

E. The data in all the statements I, II and III together is necessary to answer the question.

312351

A

312352

B

312353

C

312354

D

312355

E

Correct Option:

312354

Candidate Response:

312355

202944

LOGICAL
REASONING

If \times stands for $-$, $+$ means \times , \div means $+$ and $-$ means \div , then what is the value of the given expression ?

$$175 - 25 \div 5 + 20 \times 3 + 10 = ?$$

312356

80

312357

85

312358

92

312359

77

312360

65

Correct Option:

312359

Candidate Response:

312359

202945

LOGICAL
REASONING

In a certain code language, the symbols \times , $-$, \div , and $+$ do not represent their usual meanings.

Instead:

- \times is used for division (\div)
- $-$ is used for multiplication (\times)
- \div is used for addition ($+$)
- $+$ is used for subtraction ($-$)

Using this information, find the value of the expression:

$$(5-17\div 5)\times 9+13$$

312361 -3

312362 3

312363 2

312364 -4

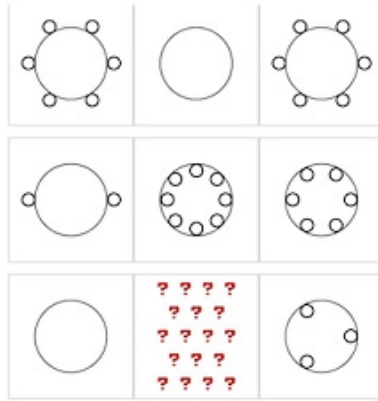
312365 5

| | |
|----------------------------------|--------------------------------------|
| Correct Option: 312361 | Candidate Response: 312364 |
|----------------------------------|--------------------------------------|

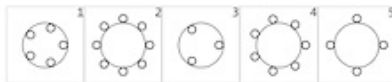
202946

ABSTRACT
REASONING

DIRECTIONS for the question: Study the figure given below and answer the following question.



Which of the following figure shall come in place of '?' :



312366

1

312367

2

312368

3

312369

4

312370

5

Correct Option:

312368

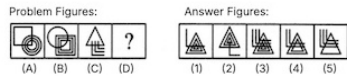
Candidate Response:

312367

202947

ABSTRACT
REASONING

Select a suitable figure from the Answer Figures that would replace the question mark (?) from the problem figure ?



312371 (1)

312372 (2)

312373 (3)

312374 (4)

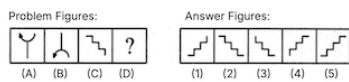
312375 (5)

| | |
|----------------------------------|--------------------------------------|
| Correct Option: 312371 | Candidate Response: 312371 |
|----------------------------------|--------------------------------------|

202948

ABSTRACT REASONING

Select a suitable figure from the Answer Figures that would replace the question mark (?) as given in (D) :



312376 (1)

312377 (2)

312378

(3)

312379

(4)

312380

(5)

Correct Option:

312376

Candidate Response:

312378

202949

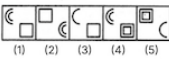
ABSTRACT
REASONING

Select a suitable figure from the Answer Figures that would replace the question mark (?) as given in (D) :

Problem Figures:



Answer Figures:



312381

(1)

312382

(2)

312383

(3)

312384

(4)

312385

(5)

Correct Option:

312382

Candidate Response:

312382

202950

ABSTRACT
REASONING

Select a suitable figure from the Answer Figures that would replace the question mark (?) as given in (D) :



(A) (B) (C) (D)

1 2 3 4 5

312386

1

312387

2

312388

3

312389

4

312390

5

Correct Option:

312388

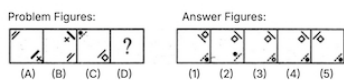
Candidate Response:

312388

202951

ABSTRACT
REASONING

Select a suitable figure from the Answer Figures that would replace the question mark (?) as given in (D) :



Problem Figures:

Answer Figures:

(A) (B) (C) (D)

(1) (2) (3) (4) (5)

312391

(1)

312392

(2)

312393

(3)

312394

(4)

312395

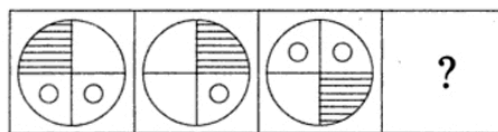
(5)

| | |
|----------------------------------|--------------------------------------|
| Correct Option: 312392 | Candidate Response: 312392 |
|----------------------------------|--------------------------------------|

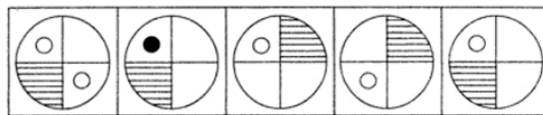
202952

ABSTRACT
REASONING

DIRECTIONS for the question: Study the figure given below and answer the following question.



A B C D



1 2 3 4 5

Which option shall best complete the series shown by '?' in D :

312396

1

312397

2

312398

3

312399

4

312400

5

Correct Option:

312400

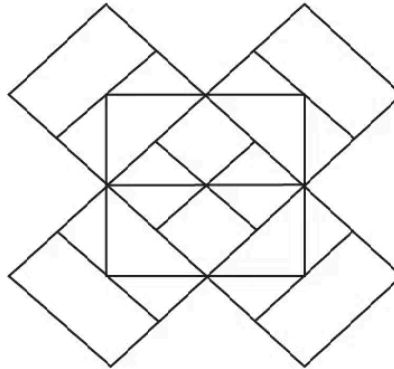
Candidate Response:

312400

202953

ABSTRACT
REASONING

How many rectangles are there in the figure below?



312401

37

312402

44

312403

48

312404

41

312405

34

Correct Option:

312405

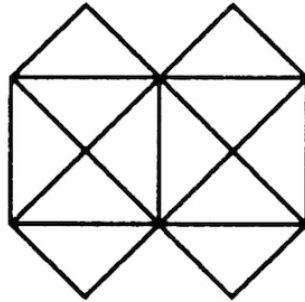
Candidate Response:

312401

202954

ABSTRACT
REASONING

How many minimum straight lines are needed to construct the below given figure ?



312406

17

312407

13

312408

11

312409

15

312410

10

Correct Option:

312407

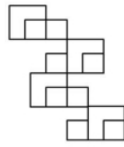
Candidate Response:

312410

202955

ABSTRACT
REASONING

Find the number of squares in the given figure ?



312411

12

312412

13

312413

14

312414

18

312415

10

Correct Option:

312411

Candidate Response:

312411

202956

ABSTRACT
REASONING

Find the number of triangles in the given figure ?



312416

11

312417

12

312418

10

312419

9

312420

13

Correct Option:

312417

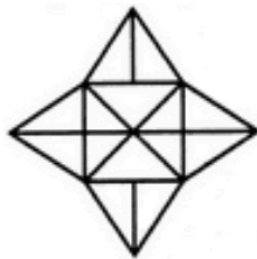
Candidate Response:

312417

202957

ABSTRACT
REASONING

Find the number of triangles in the given figure.



312421

19

312422

25

312423

32

312424

28

312425

35

Correct Option:

312424

Candidate Response:

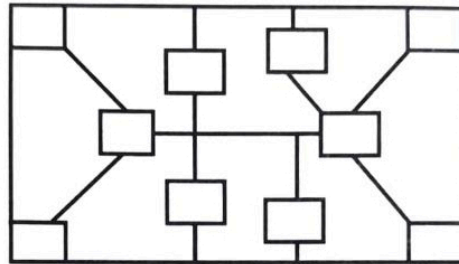
312424

202958

ABSTRACT
REASONING

DIRECTIONS for the question: Study the figure given below and answer the following question.

How many rectangles are there in the following figure?



312426

9

312427

11

312428

10

312429

12

312430

13

Correct Option:

312427

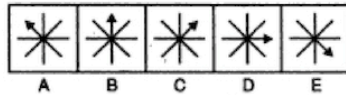
Candidate Response:

312427

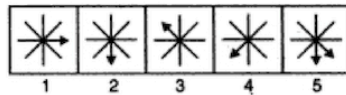
202959

ABSTRACT
REASONING

Given below are five images named A, B, C, D and E that follow a certain pattern.



Choose from the other series of five images named, 1, 2, 3, 4 and 5, the image that correctly continues the pattern that is found in the first set of five images :



312431

1

312432

2

312433

3

312434

4

312435

5

Correct Option:

312432

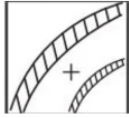
Candidate Response:

312432

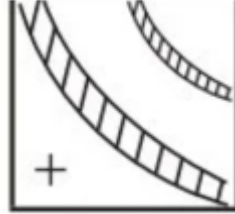
202960

ABSTRACT
REASONING


Which of the given option represents the water image of the problem image correctly ?




312436



312437



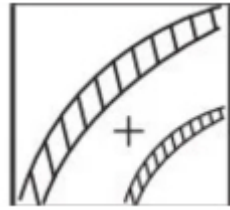
312438



312439



312440



Correct Option:

312437

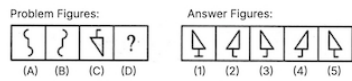
Candidate Response:

312437

202961

ABSTRACT
REASONING

Select the option that shall correctly come in place of "?" as given in (D) of the problem figure :



312441

(1)

312442

(2)

312443

(3)

312444

(4)

312445

(5)

Correct Option:

312442

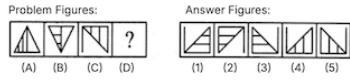
Candidate Response:

312443

202962

ABSTRACT REASONING

Identify the correct option from the Answer Figures that shall come in place of "?" :



312446

(1)

312447

(2)

312448

(3)

312449

(4)

312450

(5)

Correct Option:

312446

Candidate Response:

312446

202963

ABSTRACT REASONING

Choose the correct water image of the image given in the question :



312451



312452



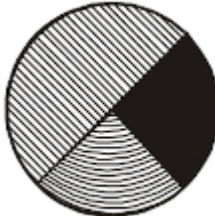
312453



312454



312455



Correct Option:

312454

Candidate Response:

312454

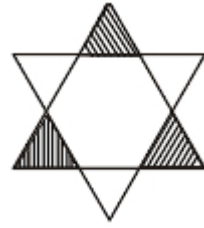
202964

ABSTRACT
REASONING

Identify the correct water image of the question figure :



312456



312457



312458



312459



312460



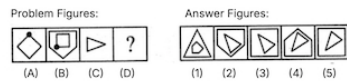
Correct Option:
312460

Candidate Response:
312458

202965

ABSTRACT
REASONING

Choose the correct option from the Answer Figure that shall come in place of "?"
in the Problem Figure :



312461

(1)

312462

(2)

312463

(3)

312464

(4)

312465

(5)

Correct Option:

312463

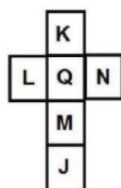
Candidate Response:

312465

202966

ABSTRACT
REASONING

A Cube is formed by folding the Sheet of paper shown here. Find the alphabet
that shall lie exactly opposite to the face on the cube that shows N :



312466

K

312467

J

312468

L

312469

M

312470

Q

Correct Option:

312468

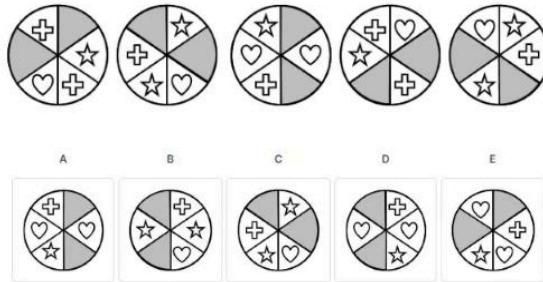
Candidate Response:

312468

202967

ABSTRACT
REASONING

Choose the image that completes the pattern (From left to right):



312471

A

312472

B

312473

C

312474

D

312475

E

Correct Option:

312474

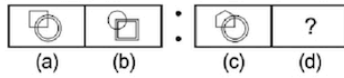
Candidate Response:

312471

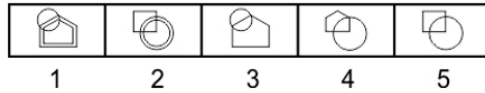
202968

ABSTRACT
REASONING

Find the figure from the Answer Figure that will replace the question mark (?) from the Problem Figure :



Problem Figure



Answer Figure

312476

1

312477

2

312478

3

312479

4

312480

5

Correct Option:

312476

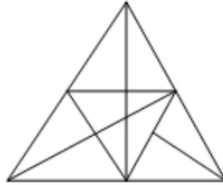
Candidate Response:

312478

202969

ABSTRACT
REASONING

Count the number of triangles in the given image ?



312481

29

312482

31

312483

28

312484

30

312485

26

Correct Option:

312481

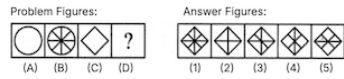
Candidate Response:

312482

202970

ABSTRACT
REASONING

Select a suitable figure from the Answer Figures that would replace the question mark (?) as given in (D) :



312486 (1)

312487 (2)

312488 (3)

312489 (4)

312490 (5)

| | |
|----------------------------------|--------------------------------------|
| Correct Option: 312486 | Candidate Response: 312486 |
|----------------------------------|--------------------------------------|

202971

QUANTITATIVE
APTITUDE

DIRECTION for the question: Solve the following question and mark the best possible option.

$587 \times 999 = ?$

312491 586413

312492 587523

312493

614823

312494

615173

312495

615976

Correct Option:

Candidate Response:

312491

312491

| | | | | | |
|----------------------------------|--------------------------------------|--|----------------------------------|--------------------------------------|--|
| 202972 | QUANTITATIVE APTITUDE | <p>How many 3-digit numbers are there in between 100 and 300, having first and the last digit as 2?</p> <p>312496 9</p> <p>312497 10</p> <p>312498 11</p> <p>312499 12</p> <p>312500 13</p> <table border="1" style="width: 100%; margin-top: 20px;"> <tr> <td style="width: 50%;">Correct Option: 312497</td> <td style="width: 50%;">Candidate Response: 312497</td> </tr> </table> | Correct Option: 312497 | Candidate Response: 312497 | |
| Correct Option: 312497 | Candidate Response: 312497 | | | | |
| 202973 | QUANTITATIVE APTITUDE | <p>DIRECTION for the question: Solve the following question and mark the best possible option.</p> <p>The H.C.F. of 2923 and 3239 is?</p> <p>312501 37</p> <p>312502 47</p> | | | |

312503 73

312504 79

312505 22

Correct Option:
312504

Candidate Response:
312501

202974

QUANTITATIVE
APTITUDE

DIRECTION for the question: Solve the following question and mark the best possible option.

$$400 \div 0.1 \times 0.2 = ?$$

312506 0.8

312507 8

312508 80

312509 8000

312510 800

Correct Option:

312510

Candidate Response:

312510

202975

QUANTITATIVE
APTITUDE

DIRECTION for the question: Solve the following question and mark the best possible option.

Given $168 \times 32 = 5376$, then $5.376 \div 16.8$ is equal to?

312511

0.032

312512

0.32

312513

3.2

312514

320

312515

32

Correct Option:

312512

Candidate Response:

312512

202976

QUANTITATIVE
APTITUDE

DIRECTION for the question: Solve the following question and mark the best possible option.

When a sum of money was distributed to 12 persons instead of 16 persons, each person got Rs. 400 more. What was the sum?

312516

Rs. 14400

312517

Rs. 16000

312518

Rs. 19200

312519

Rs. 14151

312520

Rs. 16987

Correct Option:

312518

Candidate Response:

312516

202977

QUANTITATIVE
APTITUDE

DIRECTION for the question: Solve the following question and mark the best possible option.

On a 26 question test, five points were deducted for each wrong answer and eight points were credited for each correct answer. If all the questions were answered, how many were correct if the score was zero?

312521

6

312522

9

312523

10

312524

13

312525

Correct Option:

312523

Candidate Response:

312523

202978

QUANTITATIVE
APTITUDE

DIRECTION for the question: Solve the following question and mark the best possible option.

A library has an average of 510 visitors on Sundays and 240 on other days. The average number of visitors per day in a month of 30 days beginning with a Sunday is

312526

250

312527

276

312528

280

312529

285

312530

240

Correct Option:

312529

Candidate Response:

312529

202979

QUANTITATIVE
APTITUDE

DIRECTION for the question: Solve the following question and mark the best possible option.

A motorist travels to a place 150 km away at an average speed of 50 km/hr and returns at 30 km/hr. His average speed for the whole journey in km/hr is?

312531 35

312532 37

312533 37.5

312534 40.5

312535 40

Correct Option:

312533

Candidate Response:

312533

202980

QUANTITATIVE
APTITUDE

DIRECTION for the question: Solve the following question and mark the best possible option.

The population of a town increased from 1, 75,000 to 2, 62,500 in a decade. The average % increase in the population per year is?

312536 4.37%

312537 5%

312538

| | | | | | |
|----------------------------------|--------------------------------------|--|----------------------------------|--------------------------------------|--|
| | | | 6% | | |
| | | 312539 | 8.75% | | |
| | | 312540 | 8% | | |
| | | <table border="1"> <tr> <td>Correct Option: 312537</td> <td>Candidate Response: 312536</td> </tr> </table> | Correct Option: 312537 | Candidate Response: 312536 | |
| Correct Option: 312537 | Candidate Response: 312536 | | | | |
| 202981 | QUANTITATIVE APTITUDE | <p>DIRECTION for the question: Solve the following question and mark the best possible option.</p> <p>If p% of p is 36, then p is equal to</p> | | | |
| | | 312541 | 15 | | |
| | | 312542 | 60 | | |
| | | 312543 | 600 | | |
| | | 312544 | 3600 | | |
| | | 312545 | 36 | | |

Correct Option:

312542

Candidate Response:

312542

202982

QUANTITATIVE
APTITUDE

DIRECTION for the question: Solve the following question and mark the best possible option.

The profit earned by selling an article for Rs. 900 is double the loss incurred when the same article is sold for Rs. 450. At what price should the article be sold to make a 25% profit?

312546

Rs. 600

312547

Rs. 750

312548

Rs. 800

312549

Rs. 900

312550

Rs. 450

Correct Option:

312547

Candidate Response:

312547

202983

QUANTITATIVE
APTITUDE

DIRECTION for the question: Solve the following question and mark the best possible option.

A fan is listed at Rs. 1500 and a discount of 20% is offered on the list price. What additional discount must be offered to the customer to bring the net price to Rs. 1104?

| | |
|--------|-----|
| 312551 | 8% |
| 312552 | 10% |
| 312553 | 12% |
| 312554 | 15% |
| 312555 | 20% |

Correct Option:
312551

Candidate Response:
312551

202984

QUANTITATIVE
APTITUDE

DIRECTION for the question: Solve the following question and mark the best possible option.

The expenses of A and B are in the ratio 2 : 3. A sum of Rs. 2800 is equally divided between them. If A saves Rs. 600, then B saves?

| | |
|--------|--------|
| 312556 | Rs.200 |
| 312557 | Rs.300 |
| 312558 | Rs.400 |
| 312559 | |

Rs.500

312560

Rs.600

Correct Option:

312556

Candidate Response:

312556

202985

QUANTITATIVE
APTITUDE

DIRECTION for the question: Solve the following question and mark the best possible option.

There are 420 coins consisting of one-rupee coins, 50-paise coins and 25-paise coins. If the ratio of their values is 2 : 3 : 5, then the number of one-rupee coins is

312561

20

312562

30

312563

90

312564

300

312565

50

Correct Option:

312562

Candidate Response:

312563

| | | | | | |
|----------------------------------|--------------------------------------|--|----------------------------------|--------------------------------------|--|
| 202986 | QUANTITATIVE APTITUDE | <p>DIRECTION for the question: Solve the following question and mark the best possible option.</p> <p>Manick received Rs. 6000 as his share out of the total profit of Rs. 9000 which he and Raunaq earned at the end of one year. If Manick invested Rs. 20000 for 6 months, whereas Raunaq invested his amount for the whole year, what was the amount invested by Raunaq?</p> <p>312566 Rs. 4000</p> <p>312567 Rs. 5000</p> <p>312568 Rs. 6000</p> <p>312569 Rs. 10,000</p> <p>312570 Rs. 9000</p> <table border="1" style="width: 100%; margin-top: 20px;"> <tr> <td style="width: 50%;">Correct Option: 312567</td> <td style="width: 50%;">Candidate Response: 312566</td> </tr> </table> | Correct Option: 312567 | Candidate Response: 312566 | |
| Correct Option: 312567 | Candidate Response: 312566 | | | | |
| 202987 | QUANTITATIVE APTITUDE | <p>DIRECTION for the question: Solve the following question and mark the best possible option.</p> <p>Arun, Kamal and Vinay invested ₹8000, ₹4000 and ₹8000 respectively in a business. Arun left after six months. If after eight months, there was a gain of ₹ 4005, then what will be the share of Kamal ?</p> <p>312571 ₹890</p> <p>312572</p> | | | |

₹1335

312573

₹1602

312574

₹1780

312575

₹666

Correct Option:

312571

Candidate Response:

312571

202988

QUANTITATIVE
APTITUDE

DIRECTION for the question: Solve the following question and mark the best possible option.

The cost of 16 packets of salt, each weighing 900 grams, is Rs. 28. What will be the cost of 27 packets if each packet weighs 1 kg?

312576

Rs. 52.50

312577

Rs. 56

312578

Rs. 58.50

312579

Rs. 64.75

312580

Rs. 28.50

Correct Option:

312576

Candidate Response:

312578

202989

QUANTITATIVE
APTITUDE

DIRECTION for the question: Solve the following question and mark the best possible option.

In a dairy farm, 40 cows eat 40 bags of husk in 40 days. In how many days will one cow eat one bag of husk?

312581

10

312582

20

312583

40

312584

35

312585

45

Correct Option:

312583

Candidate Response:

312583

202990

QUANTITATIVE
APTITUDE

DIRECTION for the question: Solve the following question and mark the best possible option.

Two pipes A and B can fill a tank in 15 minutes and 20 minutes respectively. Both the pipes are opened together but after 4 minutes, pipe A is turned off. What is the total time required to fill the tank?

312586

10 min 20 sec

312587

11 min 45 sec

312588

12 min 30 sec

312589

14 min 40 sec

312590

15 min 20 sec

Correct Option:

312589

Candidate Response:

312586

202991

QUANTITATIVE
APTITUDE

DIRECTION for the question: Solve the following question and mark the best possible option.

Four pipes can fill a reservoir in 15, 20, 30 and 60 hours respectively. The first pipe was opened at 8 am, the second at 9 am, the third at 10 am and the fourth at 11 am. When will the reservoir be full?

312591

1:00 pm

312592

2:00 pm

312593

2:30 pm

312594

3:00 pm

312595

4:00 pm

Correct Option:

312594

Candidate Response:

312591

202992

QUANTITATIVE
APTITUDE

DIRECTION for the question: Solve the following question and mark the best possible option.

A and B together can do a piece of work in 30 days. A having worked for 16 days, B finishes the remaining work alone in 44 days. In how many days shall B finish the whole work alone?

312596

30 days

312597

40 days

312598

60 days

312599

70 days

312600

80 days

Correct Option:

312598

Candidate Response:

312596

202993

QUANTITATIVE
APTITUDE

DIRECTION for the question: Solve the following question and mark the best possible option.

Kim can do the work in 3 days, while David can do the same work in 2 days. Both of them finish the work together and get Rs. 150. What is the share of Kim in the amount?

312601

Rs. 30

312602

Rs. 60

312603

Rs. 70

312604

Rs. 75

312605

Rs. 90

Correct Option:

312602

Candidate Response:

312601

202994

QUANTITATIVE
APTITUDE

DIRECTION for the question: Solve the following question and mark the best possible option.

If a person walked at 14 km/hr. instead of 10 km/hr., he would have walked 20 km more. The actual distance traveled by him is?

312606

50 km

312607

56 km

312608

70 km

312609

80 km

312610

30 km

Correct Option:

312606

Candidate Response:

312606

202995

QUANTITATIVE
APTITUDE

DIRECTION for the question: Solve the following question and mark the best possible option.

A train X starts from Meerut at 4 pm and reaches Ghaziabad at 5 pm. While another train Y starts from Ghaziabad at 4pm and reaches Meerut at 5:30pm. The two trains will cross each other at?

312611

4.36 pm

312612

4.42 pm

312613

4.48 pm

312614

4.50 pm

312615

4.55 pm

Correct Option:

312611

Candidate Response:

312611

202996

QUANTITATIVE
APTITUDE

DIRECTION for the question: Solve the following question and mark the best possible option.

Two trains, one from Howrah to Patna and the other from Patna to Howrah, start simultaneously. After they meet, the trains reach their destinations after 9 hours and 16 hours respectively. The ratio of their speed is?

312616

2 : 3

312617

4 : 3

312618

6 : 7

312619

9 : 16

312620

5 : 7

Correct Option:

312617

Candidate Response:

312616

202997

QUANTITATIVE
APTITUDE

DIRECTION for the question: Solve the following question and mark the best possible option.

In what ratio must water be mixed with milk to gain $16\frac{2}{3}\%$ on selling the mixture at cost price?

312621

1 : 6

312622

6 : 1

312623

2 : 3

312624

4 : 3

312625

5 : 6

Correct Option:

312621

Candidate Response:

312621

202998

QUANTITATIVE
APTITUDE

DIRECTION for the question: Solve the following question and mark the best possible option.

A vessel is filled with liquid, 3 parts of which are water and 5 parts of syrup. How much of the mixture must be drawn off and replaced with water so that the mixture may be half water and half syrup?

312626

$\frac{1}{3}$

312627

$\frac{1}{4}$

312628

$\frac{1}{5}$

312629

$\frac{1}{7}$

312630

$\frac{3}{5}$

Correct Option:

312628

Candidate Response:

312629

202999

QUANTITATIVE
APTITUDE

DIRECTION for the question: Solve the following question and mark the best possible option.

The interest on a certain deposit at 4.5% p.a. is Rs. 202.50 in one year. How much will the additional interest in one year be on the same deposit, at 5% p.a.?

312631

Rs. 20.25

312632

Rs. 22.50

312633

Rs. 25

312634

Rs. 42.75

312635

Rs. 42.25

Correct Option:

312632

Candidate Response:

312634

203000

QUANTITATIVE
APTITUDE

DIRECTION for the question: Solve the following question and mark the best possible option.

A sum of money at simple interest amounts to Rs. 815 in 3 years and Rs. 854 in 4 years. The sum is?

312636

Rs. 650

312637

Rs. 690

312638

Rs. 698

312639

Rs. 700

312640

Rs. 750

Correct Option:

312638

Candidate Response:

312638

203001

QUANTITATIVE
APTITUDE

DIRECTION for the question: Solve the following question and mark the best possible option.

There is a 60% increase in the amount in 6 years at simple interest. What will be the compound interest of Rs. 12000 after 3 years at the same rate?

312641 Rs. 2160

312642 Rs. 3120

312643 Rs. 3972

312644 Rs. 6240

312645 Rs. 1200

Correct Option:

312643

Candidate Response:

312641

203002

QUANTITATIVE
APTITUDE

DIRECTION for the question: Solve the following question and mark the best possible option.

A rectangular parking space is marked out by painting three of its sides. If the length of the unpainted side is 9 feet, and the sum of the lengths of the painted sides is 37 feet, then what is the area of the parking space in square feet?

312646 46

312647 81

312648 126

312649 252

312650 37

| | |
|----------------------------------|--------------------------------------|
| Correct Option: 312648 | Candidate Response: 312646 |
|----------------------------------|--------------------------------------|

203003

QUANTITATIVE
APTITUDE

DIRECTION for the question: Solve the following question and mark the best possible option.

A rectangular field is to be fenced on three sides, leaving a side of 20 feet uncovered. If the area of the field is 680 sq. feet, how many feet of fencing will be required?

312651 34

312652 40

312653 68

312654 88

312655 38

Correct Option:

312654

Candidate Response:

312651

203004

QUANTITATIVE
APTITUDE

DIRECTION for the question: Solve the following question and mark the best possible option.

A rectangular carpet has an area of 120 sq. meters and a perimeter of 46 meters. The length of its diagonal is?

312656

15 meters

312657

16 meters

312658

17 meters

312659

19 meters

312660

20 meters

Correct Option:

312658

Candidate Response:

312656

203005

QUANTITATIVE
APTITUDE

DIRECTION for the question: Solve the following question and mark the best possible option.

In a 100 m race, A covers the whole distance in 36 seconds and B in 45 seconds. In this race, A beats B by

312661

20 m

312662

25 m

312663

22.5 m

312664

9 m

312665

10 m

Correct Option:

312661

Candidate Response:

312661

203006

QUANTITATIVE
APTITUDE

DIRECTION for the question: Solve the following question and mark the best possible option.

In a 200 m race, A beats B by 35 m or 7 seconds. A's time over the course is

312666

40 sec

312667

47 sec

312668

33 sec

312669

35 sec

312670

20 sec

Correct Option:

312668

Candidate Response:

312666

203007

QUANTITATIVE
APTITUDE

DIRECTION for the question: Solve the following question and mark the best possible option.

In how many different ways can the letters of the word OPTICAL can be arranged in such a way that the vowels always come together?

312671

120

312672

720

312673

2160

312674

4320

312675

6

Correct Option:

312672

Candidate Response:

312671

203008

QUANTITATIVE
APTITUDE

DIRECTION for the question: Solve the following question and mark the best possible option.

In a class, there are 15 boys and 10 girls. Three students are selected at random. The probability that the selected students are 2 boys and 1 girl is:

312676

$$\frac{21}{46}$$

312677

$$\frac{25}{117}$$

312678

$$\frac{1}{50}$$

312679

$$\frac{3}{25}$$

312680

$$\frac{21}{31}$$

Correct Option:

312676

Candidate Response:

312676

203009

QUANTITATIVE
APTITUDE

DIRECTION for the question: Solve the following question and mark the best possible option.

Two dice are tossed. The probability that the total score is a prime number is

312681

$$\frac{1}{6}$$

312682

$$\frac{1}{2}$$

312683

$\frac{5}{12}$

312684

$\frac{7}{9}$

312685

$\frac{2}{3}$

Correct Option:

312683

Candidate Response:

312681

203010

QUANTITATIVE
APTITUDE

DIRECTION for the question: Find the next number in the sequence

7, 26, 63, 124, 215, 342, (---)

312686

481

312687

400

312688

511

312689

391

312690

421

Correct Option:

312688

Candidate Response:

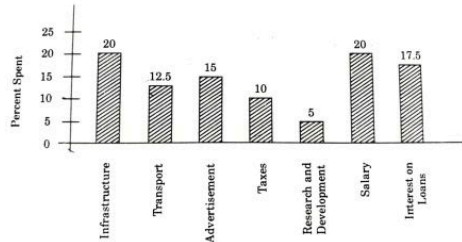
312686

203011

QUANTITATIVE
APTITUDE

DIRECTIONS for Questions: The bar-graph given below shows the percentage distribution of total expenditures of a company under various expense heads during 2023. Study the graph and answer the questions that follow:

Percentage Distribution of Total Expenditures of a Company



The expenditure on the interest on loans is by what percentage more than the expenditure on transport?

312691

5%

312692

10%

312693

20%

312694

30%

312695

40%

Correct Option:

312695

Candidate Response:

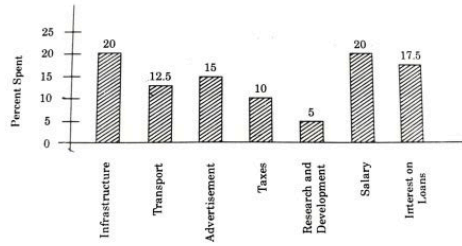
312691

203012

QUANTITATIVE
APTITUDE

DIRECTIONS for Questions: The bar-graph given below shows the percentage distribution of total expenditures of a company under various expense heads during 2023. Study the graph and answer the questions that follow:

Percentage Distribution of Total Expenditures of a Company



What is the ratio of the total expenditure on infrastructure and transport to the total expenditure on taxes and interest on loans?

312696

5 : 4

312697

8 : 7

312698

9 : 7

312699

13 : 11

312700

5 : 9

Correct Option:

312699

Candidate Response:

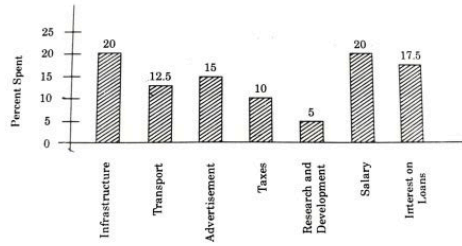
312696

203013

QUANTITATIVE
APTITUDE

DIRECTIONS for Questions: The bar-graph given below shows the percentage distribution of total expenditures of a company under various expense heads during 2023. Study the graph and answer the questions that follow:

Percentage Distribution of Total Expenditures of a Company



If the expenditure on advertisements is Rs. 2.10 crores, then the difference between the expenditures on transport and taxes is:

312701

Rs. 1.25 crores

312702

Rs. 95 lakhs

312703

Rs. 65 lakhs

312704

Rs. 35 lakhs

312705

Rs. 25 lakhs

Correct Option:

312704

Candidate Response:

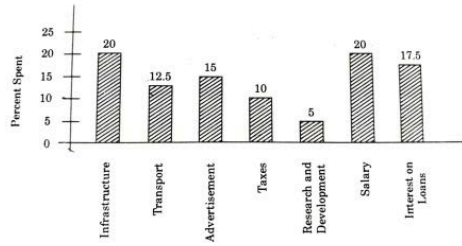
312701

203014

QUANTITATIVE
APTITUDE

DIRECTIONS for Questions: The bar-graph given below shows the percentage distribution of total expenditures of a company under various expense heads during 2023. Study the graph and answer the questions that follow:

Percentage Distribution of Total Expenditures of a Company



The total amount of expenditure of the company is how many times the expenditure on research and development?

312706

27

312707

20

312708

18

312709

8

312710

5

Correct Option:

312707

Candidate Response:

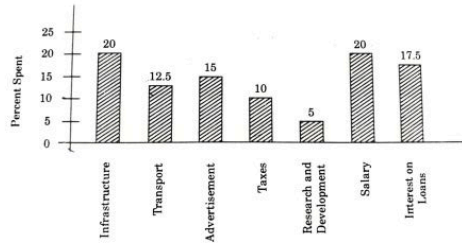
312706

203015

QUANTITATIVE
APTITUDE

DIRECTIONS for Questions: The bar-graph given below shows the percentage distribution of total expenditures of a company under various expense heads during 2023. Study the graph and answer the questions that follow:

Percentage Distribution of Total Expenditures of a Company



If the interest on loans amounted to Rs. 2.45 crores, then the total amount of expenditure on advertisements, taxes and research and development is:

312711

Rs. 7 crores

312712

Rs. 5.4 crores

312713

Rs. 4.2 crores

312714

Rs. 3 crores

312715

Rs. 2.4 crores

Correct Option:

312713

Candidate Response:

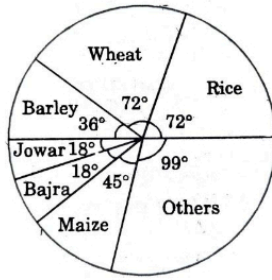
312711

203016

QUANTITATIVE
APTITUDE

DIRECTIONS for Questions: The pie-chart provided below gives the distribution of land (in a village) under various food crops. Study the pie-chart carefully and answer the questions that follow.

Distribution of Areas (In Acres) under various food crops



Which combination of three crops contributes to 50% of the total area under the food crops?

312716

Wheat, Barley and Jowar

312717

Rice, Wheat and Jowar

312718

Rice, Wheat and Barley

312719

Bajra , Maize and Rice

312720

Barley, Jowar and Rice

Correct Option:

312718

Candidate Response:

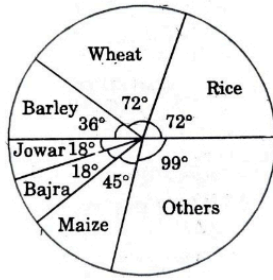
312716

203017

QUANTITATIVE
APTITUDE

DIRECTIONS for Questions: The pie-chart provided below gives the distribution of land (in a village) under various food crops. Study the pie-chart carefully and answer the questions that follow.

Distribution of Areas (In Acres) under various food crops



If the total area under jowar was 1.5 million acres, then what was the area (in million acres) under rice?

312721

6

312722

7.5

312723

9

312724

4.5

312725

2

Correct Option:

312721

Candidate Response:

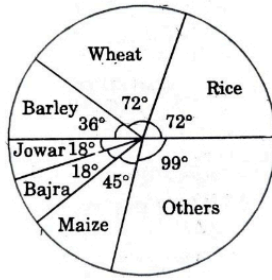
312721

203018

QUANTITATIVE
APTITUDE

DIRECTIONS for Questions: The pie-chart provided below gives the distribution of land (in a village) under various food crops. Study the pie-chart carefully and answer the questions that follow.

Distribution of Areas (In Acres) under various food crops



If the production of wheat is 6 times that of barley, then what is the ratio between the yield per acre of wheat and barley?

312726

3 : 2

312727

3 : 1

312728

12 : 1

312729

2 : 3

312730

3 : 5

Correct Option:

312727

Candidate Response:

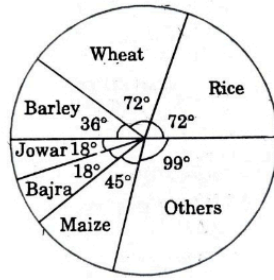
312726

203019

QUANTITATIVE
APTITUDE

DIRECTIONS for Questions: The pie-chart provided below gives the distribution of land (in a village) under various food crops. Study the pie-chart carefully and answer the questions that follow.

Distribution of Areas (In Acres) under various food crops



If the yield per acre of rice was 50% more than that of barley, then the production of barley is what percentage of that of rice?

312731

30%

312732

33.33%

312733

35.5%

312734

36%

312735

50.65%

Correct Option:

312732

Candidate Response:

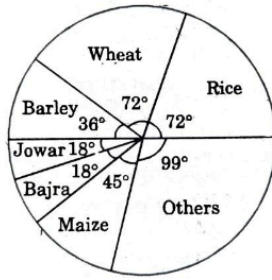
312731

203020

QUANTITATIVE
APTITUDE

DIRECTIONS for Questions: The pie-chart provided below gives the distribution of land (in a village) under various food crops. Study the pie-chart carefully and answer the questions that follow.

Distribution of Areas (In Acres) under various food crops



If the total area goes up by 5%, and the area under wheat production goes up by 12%, then what will be the angle for wheat in the new pie-chart?

312736

62.4°

312737

76.8°

312738

80.6°

312739

84.2°

312740

12.4°

Correct Option:

312737

Candidate Response:

312736

203021

VERBAL
ABILITY

Read the passage and answer the following questions

"Sarcasm is the lowest form of wit but the highest form of intelligence" wrote that _____ of wit, Oscar Wilde. Whether sarcasm is a sign of intelligence or not, communication experts and marriage counsellors alike typically advise us to stay away from this particular form of expression. The reason is simple: sarcasm expresses the poisonous sting of contempt, hurting others and harming relationships.

As a form of communication, sarcasm takes on the debt of conflict. And yet, our research suggests, there may also be some unexpected benefits from sarcasm, greater creativity. The use of sarcasm, in fact, promotes creativity for those on both the giving and receiving end of sarcastic exchanges. Instead of avoiding sarcasm completely in the office, the research suggests sarcasm, used with care and in moderation, can be effectively used and trigger some creative sparks. Sarcasm involves constructing or exposing contradictions between intended meanings.

The most common form of verbal irony, sarcasm is often used to humorously convey thinly veiled disapproval or scorn. "Pat, don't work so hard", a boss might say upon catching his assistant surfing the Internet. Early research on sarcasm explored how people interpret statements and found that, as expected, sarcasm makes a statement sound more critical. Participants rated sarcasm to be more condemning than literal statements. Why might sarcasm enhance creativity? Because the brain must think creatively to understand or convey a sarcastic comment, sarcasm may lead to clearer and more creative thinking.

To either create or understand sarcasm, tone must overcome the contradiction between the literal and actual meanings of the sarcastic expressions. Sarcasm is a process that activates, and is facilitated by, abstraction, which in turn promotes creative thinking. Consider the following example, which comes from a conversation one of my friends had a few weeks before getting married. His fiancée woke him up as he was soundly asleep at night to tell him about some new ideas she has for their upcoming wedding next month - many of which were quite expensive.

According to the passage, which of the following is most nearly the same in meaning as the word 'condemning' as used in the passage?

312741

censuring

312742

hurting

312743

killing

312744

shouting

312745

scolding

Correct Option:

312741

Candidate Response:

312745

203022

VERBAL
ABILITY**Read the passage and answer the following questions**

"Sarcasm is the lowest form of wit but the highest form of intelligence" wrote that _____ of wit, Oscar Wilde. Whether sarcasm is a sign of intelligence or not, communication experts and marriage counsellors alike typically advise us to stay away from this particular form of expression. The reason is simple: sarcasm expresses the poisonous sting of contempt, hurting others and harming relationships.

As a form of communication, sarcasm takes on the debt of conflict. And yet, our research suggests, there may also be some unexpected benefits from sarcasm, greater creativity. The use of sarcasm, in fact, promotes creativity for those on both the giving and receiving end of sarcastic exchanges. Instead of avoiding sarcasm completely in the office, the research suggests sarcasm, used with care and in moderation, can be effectively used and trigger some creative sparks. Sarcasm involves constructing or exposing contradictions between intended meanings.

The most common form of verbal irony, sarcasm is often used to humorously convey thinly veiled disapproval or scorn. "Pat, don't work so hard", a boss might say upon catching his assistant surfing the Internet. Early research on sarcasm explored how people interpret statements and found that, as expected, sarcasm makes a statement sound more critical. Participants rated sarcasm to be more condemning than literal statements. Why might sarcasm enhance creativity? Because the brain must think creatively to understand or convey a sarcastic comment, sarcasm may lead to clearer and more creative thinking.

To either create or understand sarcasm, tone must overcome the contradiction between the literal and actual meanings of the sarcastic expressions. Sarcasm is a process that activates, and is facilitated by, abstraction, which in turn promotes creative thinking. Consider the following example, which comes from a conversation one of my friends had a few weeks before getting married. His fiancée woke him up as he was soundly asleep at night to tell him about some new ideas she has for their upcoming wedding next month - many of which were quite expensive.

Which of the following is false concerning sarcasm according to the passage?

312746

Sarcasm expresses the poisonous sting of contempt.

312747

Sarcasm hurts others and harms relationships.

312748

Sarcasm takes on the debt of conflict.

312749

There are some unexpected benefits from sarcasm.

312750

Sarcasm should be entirely avoided as it does not have any beneficial effects.

Correct Option:

312750

Candidate Response:

312750

203023

VERBAL
ABILITY

Read the passage and answer the following questions

"Sarcasm is the lowest form of wit but the highest form of intelligence" wrote that _____ of wit, Oscar Wilde. Whether sarcasm is a sign of intelligence or not, communication experts and marriage counsellors alike typically advise us to stay away from this particular form of expression. The reason is simple: sarcasm expresses the poisonous sting of contempt, hurting others and harming relationships.

As a form of communication, sarcasm takes on the debt of conflict. And yet, our research suggests, there may also be some unexpected benefits from sarcasm, greater creativity. The use of sarcasm, in fact, promotes creativity for those on both the giving and receiving end of sarcastic exchanges. Instead of avoiding sarcasm completely in the office, the research suggests sarcasm, used with care and in moderation, can be effectively used and trigger some creative sparks. Sarcasm involves constructing or exposing contradictions between intended meanings.

The most common form of verbal irony, sarcasm is often used to humorously convey thinly veiled disapproval or scorn. "Pat, don't work so hard", a boss might say upon catching his assistant surfing the Internet. Early research on sarcasm explored how people interpret statements and found that, as expected, sarcasm makes a statement sound more critical. Participants rated sarcasm to be more condemning than literal statements. Why might sarcasm enhance creativity? Because the brain must think creatively to understand or convey a sarcastic comment, sarcasm may lead to clearer and more creative thinking.

To either create or understand sarcasm, one must overcome the contradiction between the literal and actual meanings of the sarcastic expressions. Sarcasm is a process that activates, and is facilitated by, abstraction, which in turn promotes creative thinking. Consider the following example, which comes from a conversation one of my friends had a few weeks before getting married. His fiancée woke him up as he was soundly asleep at night to tell him about some new ideas she has for their upcoming wedding next month - many of which were quite expensive.

Fill in the blank given in the passage with the correct given word out of the following options.

312751

expert

312752

clown

312753

connoisseur

312754

personality

312755

player

Correct Option:

312753

Candidate Response:

312751

203024

VERBAL
ABILITY

Read the passage and answer the following questions

"Sarcasm is the lowest form of wit but the highest form of intelligence" wrote that _____ of wit, Oscar Wilde. Whether sarcasm is a sign of intelligence or not, communication experts and marriage counsellors alike typically advise us to stay away from this particular form of expression. The reason is simple: sarcasm expresses the poisonous sting of contempt, hurting others and harming relationships.

As a form of communication, sarcasm takes on the debt of conflict. And yet, our research suggests, there may also be some unexpected benefits from sarcasm, greater creativity. The use of sarcasm, in fact, promotes creativity for those on both the giving and receiving end of sarcastic exchanges. Instead of avoiding sarcasm completely in the office, the research suggests sarcasm, used with care and in moderation, can be effectively used and trigger some creative sparks. Sarcasm involves constructing or exposing contradictions between intended meanings.

The most common form of verbal irony, sarcasm is often used to humorously convey thinly veiled disapproval or scorn. "Pat, don't work so hard", a boss might say upon catching his assistant surfing the Internet. Early research on sarcasm explored how people interpret statements and found that, as expected, sarcasm makes a statement sound more critical. Participants rated sarcasm to be more condemning than literal statements. Why might sarcasm enhance creativity? Because the brain must think creatively to understand or convey a sarcastic comment, sarcasm may lead to clearer and more creative thinking.

To either create or understand sarcasm, tone must overcome the contradiction between the literal and actual meanings of the sarcastic expressions. Sarcasm is a process that activates, and is facilitated by, abstraction, which in turn promotes creative thinking. Consider the following example, which comes from a conversation one of my friends had a few weeks before getting married. His fiancée woke him up as he was soundly asleep at night to tell him about some new ideas she has for their upcoming wedding next month - many of which were quite expensive.

Which of the following statements is / are true according to the author of the passage?

- A. Words used in sarcasm are to be considered for their literal meaning.
- B. Sarcasm does involve an element of humour in it.
- C. Tone of voice is one of the essential components of conveying sarcasm.
- D. Sarcasm does not have any benefits and should be completely avoided.
- E. Sarcasm can be understood only by very intelligent people.

312756

Only A

312757

Only B and C

312758

Only D

312759

Only E

312760

Only C

Correct Option:

312757

Candidate Response:

312760

203025

VERBAL
ABILITY

Read the passage and answer the following questions

"Sarcasm is the lowest form of wit but the highest form of intelligence" wrote that _____ of wit, Oscar Wilde. Whether sarcasm is a sign of intelligence or not, communication experts and marriage counsellors alike typically advise us to stay away from this particular form of expression. The reason is simple: sarcasm expresses the poisonous sting of contempt, hurting others and harming relationships.

As a form of communication, sarcasm takes on the debt of conflict. And yet, our research suggests, there may also be some unexpected benefits from sarcasm, greater creativity. The use of sarcasm, in fact, promotes creativity for those on both the giving and receiving end of sarcastic exchanges. Instead of avoiding sarcasm completely in the office, the research suggests sarcasm, used with care and in moderation, can be effectively used and trigger some creative sparks. Sarcasm involves constructing or exposing contradictions between intended meanings.

The most common form of verbal irony, sarcasm is often used to humorously convey thinly veiled disapproval or scorn. "Pat, don't work so hard", a boss might say upon catching his assistant surfing the Internet. Early research on sarcasm explored how people interpret statements and found that, as expected, sarcasm makes a statement sound more critical. Participants rated sarcasm to be more condemning than literal statements. Why might sarcasm enhance creativity? Because the brain must think creatively to understand or convey a sarcastic comment, sarcasm may lead to clearer and more creative thinking.

To either create or understand sarcasm, tone must overcome the contradiction between the literal and actual meanings of the sarcastic expressions. Sarcasm is a process that activates, and is facilitated by, abstraction, which in turn promotes creative thinking. Consider the following example, which comes from a conversation one of my friends had a few weeks before getting married. His fiancée woke him up as he was soundly asleep at night to tell him about some new ideas she has for their upcoming wedding next month - many of which were quite expensive.

What is false concerning the relationship between sarcasm and creativity?

312761

The brain must think creatively to understand or convey a sarcastic comment.

312762

Sarcasm makes a statement sound less critical.

312763

Sarcasm may lead to clearer and more creative thinking.

312764

To either create or understand sarcasm, tone must overcome the contradiction between the literal and actual meanings of the sarcastic expressions.

312765

Sarcasm is a process that activates, and is facilitated by, abstraction, which in turn promotes creative thinking.

Correct Option:

312762

Candidate Response:

312762

203026

VERBAL
ABILITY

Read the passage given below carefully and answer the question that follows:

A majority of Indians prefer to use the internet for accessing banking and other financial services than shopping online, shows a new survey. Almost 57% of Indian respondents using the internet prefer to bank online and use other financial services due to hassle-free access and time saving features of online banking according to the survey.

Checking information on products and services online comes a close second at 53% while 50% shop for products online. The fourth on the list-around 42% of respondents in India surfed online to look for jobs, the survey said.

Online banking has made things much easier for the people and it saves a lot of time. It has eliminated the problems associated with traditional way of banking where one had to stand in a queue and fill up several forms. Most of the banks in India have introduced customer-friendly on-line banking facility with advanced security features to protect customers against cybercrime. The easy registration process for net banking has improved customers' access to several banking products increased customer loyalty, facilitated money transfer to any bank across India and has helped banks-attract new customers.

The Indian results closely track the global trends as well conducted among 18216 people from 24 countries, the survey showed that banking, keeping track of finances and searching for jobs are the main tasks of internet users around the globe. Overall, 60% of people surveyed used the internet to check their bank account and other financial assets in the past 90 days, making it the most popular use of the internet globally, shopping was not too far behind at 48%, 41 % went on line to search for a job as per the survey, almost 90% of respondents in Sweden use e-banking.

Online banking has also caught on in a big way in nations like France, Canada, Australia, Poland, South Africa and Belgium. The Germans and British are at the top for doing online shopping with 74% of respondents in both countries having bought something online in the past three months. They are followed by 68% of respondents in Sweden. 65% in US and 62% in South Korea.

Which of the following is not true in the context of the passage?

312766

Internet users across the globe are mainly interested in looking for jobs and keeping track of finances

312767

Germany and Great Britain are the top countries where online shopping is quite popular

312768

Many people in Sweden use e-banking to maintain their finances

312769

A majority of Indians prefer shopping online as compared to other online activities

312770

Most of the banks in India have introduced customer-friendly on-line banking facility with advanced security features to protect customers against cybercrime

Correct Option:

312769

Candidate Response:

312769

203027

VERBAL
ABILITY

Read the passage given below carefully and answer the question that follows:

A majority of Indians prefer to use the internet for accessing banking and other financial services than shopping online, shows a new survey. Almost 57% of Indian respondents using the internet prefer to bank online and use other financial services due to hassle-free access and time saving features of online banking according to the survey.

Checking information on products and services online comes a close second at 53% while 50% shop for products online. The fourth on the list-around 42% of respondents in India surfed online to look for jobs, the survey said.

Online banking has made things much easier for the people and it saves a lot of time. It has eliminated the problems associated with traditional way of banking where one had to stand in a queue and fill up several forms. Most of the banks in India have introduced customer-friendly on-line banking facility with advanced security features to protect customers against cybercrime. The easy registration process for net banking has improved customers' access to several banking products increased customer loyalty, facilitated money transfer to any bank across India and has helped banks-attract new customers.

The Indian results closely track the global trends as well conducted among 18216 people from 24 countries, the survey showed that banking, keeping track of finances and searching for jobs are the main tasks of internet users around the globe. Overall, 60% of people surveyed used the internet to check their bank account and other financial assets in the past 90 days, making it the most popular use of the internet globally, shopping was not too far behind at 48%, 41 % went on line to search for a job as per the survey, almost 90% of respondents in Sweden use e-banking.

Online banking has also caught on in a big way in nations like France, Canada, Australia, Poland, South Africa and Belgium. The Germans and British are at the top for doing online shopping with 74% of respondents in both countries having bought something online in the past three months. They are followed by 68% of respondents in Sweden. 65% in US and 62% in South Korea.

According to the passage, why are banks successful in attracting more customers?

312771

Banks are successful in attracting more customers due to better training provided to sales staff

312772

Easy registration process for net banking

312773

Opening more branches at more locations

312774

Providing higher interest rates on fixed deposits

312775

Providing loans at low interest rates

Correct Option:

312772

Candidate Response:

312772

203028

VERBAL
ABILITY

Read the passage given below carefully and answer the question that follows:

A majority of Indians prefer to use the internet for accessing banking and other financial services than shopping online, shows a new survey. Almost 57% of Indian respondents using the internet prefer to bank online and use other financial services due to hassle-free access and time saving features of online banking according to the survey.

Checking information on products and services online comes a close second at 53% while 50% shop for products online. The fourth on the list-around 42% of respondents in India surfed online to look for jobs, the survey said.

Online banking has made things much easier for the people and it saves a lot of time. It has eliminated the problems associated with traditional way of banking where one had to stand in a queue and fill up several forms. Most of the banks in India have introduced customer-friendly on-line banking facility with advanced security features to protect customers against cybercrime. The easy registration process for net banking has improved customers' access to several banking products increased customer loyalty, facilitated money transfer to any bank across India and has helped banks-attract new customers.

The Indian results closely track the global trends as well conducted among 18216 people from 24 countries, the survey showed that banking, keeping track of finances and searching for jobs are the main tasks of internet users around the globe. Overall, 60% of people surveyed used the internet to check their bank account and other financial assets in the past 90 days, making it the most popular use of the internet globally, shopping was not too far behind at 48%, 41% went on line to search for a job as per the survey, almost 90% of respondents in Sweden use e-banking.

Online banking has also caught on in a big way in nations like France, Canada, Australia, Poland, South Africa and Belgium. The Germans and British are at the top for doing online shopping with 74% of respondents in both countries having bought something online in the past three months. They are followed by 68% of respondents in Sweden. 65% in US and 62% in South Korea.

Which of the following activity is done by half of the Indians using internet according to the passage?

312776

Banking transactions

312777

Searching for jobs

312778

Online shopping

312779

Social networking

312780

Entertainment

Correct Option:

312778

Candidate Response:

312776

203029

VERBAL
ABILITY

Read the passage given below carefully and answer the question that follows:

A majority of Indians prefer to use the internet for accessing banking and other financial services than shopping online, shows a new survey. Almost 57% of Indian respondents using the internet prefer to bank online and use other financial services due to hassle-free access and time saving features of online banking according to the survey.

Checking information on products and services online comes a close second at 53% while 50% shop for products online. The fourth on the list-around 42% of respondents in India surfed online to look for jobs, the survey said.

Online banking has made things much easier for the people and it saves a lot of time. It has eliminated the problems associated with traditional way of banking where one had to stand in a queue and fill up several forms. Most of the banks in India have introduced customer-friendly on-line banking facility with advanced security features to protect customers against cybercrime. The easy registration process for net banking has improved customers' access to several banking products increased customer loyalty, facilitated money transfer to any bank across India and has helped banks-attract new customers.

The Indian results closely track the global trends as well conducted among 18216 people from 24 countries, the survey showed that banking, keeping track of finances and searching for jobs are the main tasks of internet users around the globe. Overall, 60% of people surveyed used the internet to check their bank account and other financial assets in the past 90 days, making it the most popular use of the internet globally, shopping was not too far behind at 48%, 41 % went on line to search for a job as per the survey, almost 90% of respondents in Sweden use e-banking.

Online banking has also caught on in a big way in nations like France, Canada, Australia, Poland, South Africa and Belgium. The Germans and British are at the top for doing online shopping with 74% of respondents in both countries having bought something online in the past three months. They are followed by 68% of respondents in Sweden. 65% in US and 62% in South Korea.

Which of the following is most nearly the same in meaning as the word, 'hassle-free' as used in the passage?

312781

Unskilled

312782

Negotiable

312783

Subtle

312784

Notable

312785

Not annoying

Correct Option:

312785

Candidate Response:

312785

203030

VERBAL
ABILITY**Read the passage given below carefully and answer the question that follows:**

A majority of Indians prefer to use the internet for accessing banking and other financial services than shopping online, shows a new survey. Almost 57% of Indian respondents using the internet prefer to bank online and use other financial services due to hassle-free access and time saving features of online banking according to the survey.

Checking information on products and services online comes a close second at 53% while 50% shop for products online. The fourth on the list-around 42% of respondents in India surfed online to look for jobs, the survey said.

Online banking has made things much easier for the people and it saves a lot of time. It has eliminated the problems associated with traditional way of banking where one had to stand in a queue and fill up several forms. Most of the banks in India have introduced customer-friendly on-line banking facility with advanced security features to protect customers against cybercrime. The easy registration process for net banking has improved customers' access to several banking products increased customer loyalty, facilitated money transfer to any bank across India and has helped banks-attract new customers.

The Indian results closely track the global trends as well conducted among 18216 people from 24 countries, the survey showed that banking, keeping track of finances and searching for jobs are the main tasks of internet users around the globe. Overall, 60% of people surveyed used the internet to check their bank account and other financial assets in the past 90 days, making it the most popular use of the internet globally, shopping was not too far behind at 48%, 41 % went on line to search for a job as per the survey, almost 90% of respondents in Sweden use e-banking.

Online banking has also caught on in a big way in nations like France, Canada, Australia, Poland, South Africa and Belgium. The Germans and British are at the top for doing online shopping with 74% of respondents in both countries having bought something online in the past three months. They are followed by 68% of respondents in Sweden. 65% in US and 62% in South Korea.

According to the passage, what inference can be made as regards the internet?

312786

It has increased the number of cybercrimes

312787

It has made lives easier than before

312788

Internet is most popular for online shopping

312789

The registration process for netbanking is difficult, yet people prefer online banking than traditional banking

312790

It is more popular for online shopping than anything else

Correct Option:

312787

Candidate Response:

312787

203031

VERBAL
ABILITY

Read the passage given below carefully and answer the question that follows:

The Voice (of Mahatma Gandhi) gave a message to the country that it needed greatly. It brought to the common people a realization of their duty to concern themselves with their affairs, it had to be listened to not only on account of its form but also for the matter which it delivered. The common people were made to take an interest in the matter in which they were governed, in the taxes they paid, in the return they got from those taxes. This interest in public affairs - politics as you may call it - was to be the concern no longer of the highly educated few but of the many the poor, the property less, the working men in town and country. Politics was not to be the concern of a small aristocracy of intellect or property of the masses. And with the change in the subjects of politics that Voice brought about also a change in the object of politics.

Till then politics had busied itself with the machinery of government towards making its personnel more and more native with proposals for a better distribution of political power, with protests against the sins of omission and commission of the administration. This voice switched politics on to concern for the needs of the common people. The improvement of the lot of the poor was to be the main concern of politics and the politician. The improvement especially of the lives of the people of the neglected villages, was to be placed before governments and political organisation as the goal of all political _____

The raising of the standard of living of the people of the villages the finding of subsidiary occupations which would give the agricultural poor work for their enforced leisure during the off season and an addition to their exiguous income housing of the poor, the sanitation of the villages these were to be the objectives to be kept in view in the towns the slums and shanties were to receive a special attention. There was especially a class of the poor for which that compassionate voice pleaded and protested.

According to the passage, who did not get interested in public affairs and politics on account of the voice?

312791

the poor

312792

the property less

312793

the working men in town and country

312794

the common people

312795

the aristocracy

Correct Option:

312795

Candidate Response:

312791

203032

VERBAL
ABILITY

Read the passage given below carefully and answer the question that follows:

The Voice (of Mahatma Gandhi) gave a message to the country that it needed greatly. It brought to the common people a realization of their duty to concern themselves with their affairs, it had to be listened to not only on account of its form but also for the matter which it delivered. The common people were made to take an interest in the matter in which they were governed, in the taxes they paid, in the return they got from those taxes. This interest in public affairs - politics as you may call it - was to be the concern no longer of the highly educated few but of the many the poor, the property less, the working men in town and country. Politics was not to be the concern of a small aristocracy of intellect or property of the masses. And with the change in the subjects of politics that Voice brought about also a change in the object of politics.

Till then politics had busied itself with the machinery of government towards making its personnel more and more native with proposals for a better distribution of political power, with protests against the sins of omission and commission of the administration. This voice switched politics on to concern for the needs of the common people. The improvement of the lot of the poor was to be the main concern of politics and the politician. The improvement especially of the lives of the people of the neglected villages, was to be placed before governments and political organisation as the goal of all political _____

The raising of the standard of living of the people of the villages the finding of subsidiary occupations which would give the agricultural poor work for their enforced leisure during the off season and an addition to their exiguous income housing of the poor, the sanitation of the villages these were to be the objectives to be kept in view in the towns the slums and shanties were to receive a special attention. there was especially a class of the poor for which that compassionate voice pleaded and protested.

What was the change in the subject of politics on account of the voice?

312796

making the government personnel more and more native

312797

concern for the needs of the common people

312798

proposals for better distribution of political power

312799

protests against the sins of omission of the administration.

312800

protests against the sins of commission of the administration.

Correct Option:

312797

Candidate Response:

312796

203033

VERBAL
ABILITY

Read the passage given below carefully and answer the question that follows:

The Voice (of Mahatma Gandhi) gave a message to the country that it needed greatly. It brought to the common people a realization of their duty to concern themselves with their affairs, it had to be listened to not only on account of its form but also for the matter which it delivered. The common people were made to take an interest in the matter in which they were governed, in the taxes they paid, in the return they got from those taxes. This interest in public affairs - politics as you may call it - was to be the concern no longer of the highly educated few but of the many the poor, the property less, the working men in town and country. Politics was not to be the concern of a small aristocracy of intellect or property of the masses. And with the change in the subjects of politics that Voice brought about also a change in the object of politics.

Till then politics had busied itself with the machinery of government towards making its personnel more and more native with proposals for a better distribution of political power, with protests against the sins of omission and of commission of the administration. This voice switched politics on to concern for the needs of the common people. The improvement of the lot of the poor was to be the main concern of politics and the politician. The improvement especially of the lives of the people of the neglected villages, was to be placed before governments and political organisation as the goal of all political _____

The raising of the standard of living of the people of the villages the finding of subsidiary occupations which would give the agricultural poor work for their enforced leisure during the off season and an addition to their exiguous income housing of the poor, the sanitation of the villages these were to be the objectives to be kept in view in the towns the slums and shanties were to receive a special attention. there was especially a class of the poor for which that compassionate voice pleaded and protested.

Which of the following was not the objective to be kept in view according to the voice?

312801

The improvement especially of the lives of the people of the neglected villages

312802

The raising of the standard of living of the people of the villages

312803

Taxes for common people

312804

The sanitation of the villages

312805

The finding of subsidiary occupations which would give the agricultural poor work for their enforced leisure during the off season

Correct Option:

312803

Candidate Response:

312801

203034

VERBAL
ABILITY

Read the passage given below carefully and answer the question that follows:

The Voice (of Mahatma Gandhi) gave a message to the country that it needed greatly. It brought to the common people a realization of their duty to concern themselves with their affairs, it had to be listened to not only on account of its form but also for the matter which it delivered. The common people were made to take an interest in the matter in which they were governed, in the taxes they paid, in the return they got from those taxes. This interest in public affairs - politics as you may call it - was to be the concern no longer of the highly educated few but of the many the poor, the property less, the working men in town and country. Politics was not to be the concern of a small aristocracy of intellect or property of the masses. And with the change in the subjects of politics that Voice brought about also a change in the object of politics.

Till then politics had busied itself with the machinery of government towards making its personnel more and more native with proposals for a better distribution of political power, with protests against the sins of omission and commission of the administration. This voice switched politics on to concern for the needs of the common people. The improvement of the lot of the poor was to be the main concern of politics and the politician. The improvement especially of the lives of the people of the neglected villages, was to be placed before governments and political organisation as the goal of all political _____

The raising of the standard of living of the people of the villages the finding of subsidiary occupations which would give the agricultural poor work for their enforced leisure during the off season and an addition to their exiguous income housing of the poor, the sanitation of the villages these were to be the objectives to be kept in view in the towns the slums and shanties were to receive a special attention. There was especially a class of the poor for which that compassionate voice pleaded and protested.

Why did the people listen to the voice of Mahatma Gandhi?

312806

People listened to the voice because it was aimed at the government machinery

312807

People listened to the voice because it gave a strong message to the aristocracy

312808

People listened to the voice because it gave a trivial message.

312809

People listened to the voice not only on account of its form, but also for the matter that it delivered

312810

People listened to the voice because it propagated for better distribution of political power

Correct Option:

312809

Candidate Response:

312806

203035

VERBAL
ABILITY**Read the passage given below carefully and answer the question that follows:**

The Voice (of Mahatma Gandhi) gave a message to the country that it needed greatly. It brought to the common people a realization of their duty to concern themselves with their affairs, it had to be listened to not only on account of its form but also for the matter which it delivered. The common people were made to take an interest in the matter in which they were governed, in the taxes they paid, in the return they got from those taxes. This interest in public affairs - politics as you may call it - was to be the concern no longer of the highly educated few but of the many the poor, the property less, the working men in town and country. Politics was not to be the concern of a small aristocracy of intellect or property of the masses. And with the change in the subjects of politics that Voice brought about also a change in the object of politics.

Till then politics had busied itself with the machinery of government towards making its personnel more and more native with proposals for a better distribution of political power, with protests against the sins of omission and commission of the administration. This voice switched politics on to concern for the needs of the common people. The improvement of the lot of the poor was to be the main concern of politics and the politician. The improvement especially of the lives of the people of the neglected villages, was to be placed before governments and political organisation as the goal of all political _____

The raising of the standard of living of the people of the villages the finding of subsidiary occupations which would give the agricultural poor work for their enforced leisure during the off season and an addition to their exiguous income housing of the poor, the sanitation of the villages these were to be the objectives to be kept in view in the towns the slums and shanties were to receive a special attention. There was especially a class of the poor for which that compassionate voice pleaded and protested.

Fill in the blank in the given passage with a word that fits perfectly grammatically and also contextually out of the given options below.

312811

strife

312812

endeavour

312813

methods

312814

studies

312815

science

Correct Option:

312812

Candidate Response:

312811

203036

VERBAL
ABILITY

Read the passage given below carefully and answer the question that follows:

Supposing you have to make a payment of Rs 100, you can do so in Rupee coins but it would be cumbersome to pay in nickel or copper coins, because they are heavy to carry and also because it takes much time to count them. The Government therefore permits you to make the payment in Rupee-notes. What are these Rupee notes really? They are a kind of money, right enough although they are made of paper instead of metal. You can use them in just the same way that you use ordinary money. The reason why they are made of paper and used in that they save the trouble of carrying metal coins about-of course, paper is lighter than metal- and they also save using silver and other metals when they are scarce.

What makes these mere pieces of paper bear the value of the number of Rupees that is printed upon them? Why should a piece of paper, with "100" printed on it be worth twenty times as much as a piece of paper with "five" printed on it – and also worth a hundred times as much as a silver Rupee- coin? The reason is that Government _____ that the piece of paper is worth the amount printed on it and promises to pay that amount to anybody who wishes to exchange this paper for the Rupee-coins. Also, if you think about it you can easily realize that crores and crores more of Rupee-coins would have to be minted if all paper money were abolished.

Perhaps, you may ask, " Then why not have paper money only? Why use silver and nickel and copper at all?" The answer is -because money must as we have already said, be something so useful that everyone wants. Also, because the metals are the best form of money; and thirdly because it would be impossible to print just the right amount of paper money that would keep prices at their proper natural level. If any Government prints too much paper money, then prices go up at once. The supply of money is increased and therefore its value (in food, clothes, books, houses, land, tools and everything else) goes down.

You may think at first that it is queer to talk of having too much paper money and that money is so nice and useful that you cannot have too much of it. But if you think that, I am afraid you are forgetting that money is only useful for what it will buy so it is no good at all having more money if there are no more things to buy with it the more money there is, the higher will be the prices of everything. The same thing happens with Rupee -coins as with paper money. But it is not likely to happen, for this reason: it is very easy to print a great deal of paper money, but not at all easy to increase the number of Rupee-coins.

What is the advantage of paper money over Rupee coins according to the passage?

312816

Paper money is guaranteed by the government.

312817

Paper money is easier to carry and count.

312818

Paper is the more durable form of currency.

312819

Paper money is the acceptable form of payment in every transaction.

312820

It is not easy to print a great deal of paper money.

Correct Option:

312817

Candidate Response:

312817

203037

VERBAL
ABILITY

Read the passage given below carefully and answer the question that follows:

Supposing you have to make a payment of Rs 100, you can do so in Rupee coins but it would be cumbersome to pay in nickel or copper coins, because they are heavy to carry and also because it takes much time to count them. The Government therefore permits you to make the payment in Rupee-notes. What are these Rupee notes really? They are a kind of money, right enough although they are made of paper instead of metal. You can use them in just the same way that you use ordinary money. The reason why they are made of paper and used in that they save the trouble of carrying metal coins about-of course, paper is lighter than metal- and they also save using silver and other metals when they are scarce.

What makes these mere pieces of paper bear the value of the number of Rupees that is printed upon them? Why should a piece of paper, with "100" printed on it be worth twenty times as much as a piece of paper with "five" printed on it – and also worth a hundred times as much as a silver Rupee- coin? The reason is that Government _____ that the piece of paper is worth the amount printed on it and promises to pay that amount to anybody who wishes to exchange this paper for the Rupee-coins. Also, if you think about it you can easily realize that crores and crores more of Rupee-coins would have to be minted if all paper money were abolished.

Perhaps, you may ask, "Then why not have paper money only? Why use silver and nickel and copper at all?" The answer is -because money must as we have already said, be something so useful that everyone wants. Also, because the metals are the best form of money; and thirdly because it would be impossible to print just the right amount of paper money that would keep prices at their proper natural level. If any Government prints too much paper money, then prices go up at once. The supply of money is increased and therefore its value (in food, clothes, books, houses, land, tools and everything else) goes down.

You may think at first that it is queer to talk of having too much paper money and that money is so nice and useful that you cannot have too much of it. But if you think that, I am afraid you are forgetting that money is only useful for what it will buy so it is no good at all having more money if there are no more things to buy with it the more money there is, the higher will be the prices of everything. The same thing happens with Rupee -coins as with paper money. But it is not likely to happen, for this reason: it is very easy to print a great deal of paper money, but not at all easy to increase the number of Rupee-coins.

What would not happen if all paper money was abolished and only coins were used?

312821

Carrying money would become heavier

312822

Money transactions will become easier

312823

Minting money will become difficult

312824

Making payments will become cumbersome

312825

Crores and crores of rupee coins would have to be maintained

Correct Option:

312822

Candidate Response:

312822

203038

VERBAL
ABILITY

Read the passage given below carefully and answer the question that follows:

Supposing you have to make a payment of Rs 100, you can do so in Rupee coins but it would be cumbersome to pay in nickel or copper coins, because they are heavy to carry and also because it takes much time to count them. The Government therefore permits you to make the payment in Rupee-notes. What are these Rupee notes really? They are a kind of money, right enough although they are made of paper instead of metal. You can use them in just the same way that you use ordinary money. The reason why they are made of paper and used in that they save the trouble of carrying metal coins about-of course, paper is lighter than metal- and they also save using silver and other metals when they are scarce.

What makes these mere pieces of paper bear the value of the number of Rupees that is printed upon them? Why should a piece of paper, with "100" printed on it be worth twenty times as much as a piece of paper with "five" printed on it – and also worth a hundred times as much as a silver Rupee- coin? The reason is that Government _____ that the piece of paper is worth the amount printed on it and promises to pay that amount to anybody who wishes to exchange this paper for the Rupee-coins. Also, if you think about it you can easily realize that crores and crores more of Rupee-coins would have to be minted if all paper money were abolished.

Perhaps, you may ask, "Then why not have paper money only? Why use silver and nickel and copper at all?" The answer is -because money must as we have already said, be something so useful that everyone wants. Also, because the metals are the best form of money; and thirdly because it would be impossible to print just the right amount of paper money that would keep prices at their proper natural level. If any Government prints too much paper money, then prices go up at once. The supply of money is increased and therefore its value (in food, clothes, books, houses, land, tools and everything else) goes down.

You may think at first that it is queer to talk of having too much paper money and that money is so nice and useful that you cannot have too much of it. But if you think that, I am afraid you are forgetting that money is only useful for what it will buy so it is no good at all having more money if there are no more things to buy with it the more money there is, the higher will be the prices of everything. The same thing happens with Rupee -coins as with paper money. But it is not likely to happen, for this reason: it is very easy to print a great deal of paper money, but not at all easy to increase the number of Rupee-coins.

What is the need to still have silver, nickel and copper coins in spite of the advantages of paper money according to the passage?

312826

Printing paper money is easier than minting coins.

312827

Silver, nickel and copper coins are the best form of payment for large transactions.

312828

It is impossible to print just the right amount of paper money that would keep prices at their proper natural level.

312829

Paper money depreciates in value faster as compared to silver, nickel and copper coins.

312830

Paper money can be easily counterfeited.

Correct Option:

312828

Candidate Response:

312830

203039

VERBAL
ABILITY

Read the passage given below carefully and answer the question that follows:

Supposing you have to make a payment of Rs 100, you can do so in Rupee coins but it would be cumbersome to pay in nickel or copper coins, because they are heavy to carry and also because it takes much time to count them. The Government therefore permits you to make the payment in Rupee-notes. What are these Rupee notes really? They are a kind of money, right enough although they are made of paper instead of metal. You can use them in just the same way that you use ordinary money. The reason why they are made of paper and used in that they save the trouble of carrying metal coins about-of course, paper is lighter than metal- and they also save using silver and other metals when they are scarce.

What makes these mere pieces of paper bear the value of the number of Rupees that is printed upon them? Why should a piece of paper, with "100" printed on it be worth twenty times as much as a piece of paper with "five" printed on it – and also worth a hundred times as much as a silver Rupee- coin? The reason is that Government _____ that the piece of paper is worth the amount printed on it and promises to pay that amount to anybody who wishes to exchange this paper for the Rupee-coins. Also, if you think about it you can easily realize that crores and crores more of Rupee-coins would have to be minted if all paper money were abolished.

Perhaps, you may ask, "Then why not have paper money only? Why use silver and nickel and copper at all?" The answer is -because money must as we have already said, be something so useful that everyone wants. Also, because the metals are the best form of money; and thirdly because it would be impossible to print just the right amount of paper money that would keep prices at their proper natural level. If any Government prints too much paper money, then prices go up at once. The supply of money is increased and therefore its value (in food, clothes, books, houses, land, tools and everything else) goes down.

You may think at first that it is queer to talk of having too much paper money and that money is so nice and useful that you cannot have too much of it. But if you think that, I am afraid you are forgetting that money is only useful for what it will buy so it is no good at all having more money if there are no more things to buy with it the more money there is, the higher will be the prices of everything. The same thing happens with Rupee -coins as with paper money. But it is not likely to happen, for this reason: it is very easy to print a great deal of paper money, but not at all easy to increase the number of Rupee-coins.

Which statement is false according to the passage?

312831

Money is only useful for what it will buy

312832

The more money there is, the lower will be the prices of everything.

312833

It is very easy to print a great deal of paper money

312834

It is not at all easy to increase the number of Rupee-coins.

312835

It is no good at all having more money if there are no more things to buy with it

Correct Option:

312832

Candidate Response:

312832

203040

VERBAL
ABILITY

Read the passage given below carefully and answer the question that follows:

Supposing you have to make a payment of Rs 100, you can do so in Rupee coins but it would be cumbersome to pay in nickel or copper coins, because they are heavy to carry and also because it takes much time to count them. The Government therefore permits you to make the payment in Rupee-notes. What are these Rupee notes really? They are a kind of money, right enough although they are made of paper instead of metal. You can use them in just the same way that you use ordinary money. The reason why they are made of paper and used in that they save the trouble of carrying metal coins about-of course, paper is lighter than metal- and they also save using silver and other metals when they are scarce.

What makes these mere pieces of paper bear the value of the number of Rupees that is printed upon them? Why should a piece of paper, with "100" printed on it be worth twenty times as much as a piece of paper with "five" printed on it – and also worth a hundred times as much as a silver Rupee- coin? The reason is that Government _____ that the piece of paper is worth the amount printed on it and promises to pay that amount to anybody who wishes to exchange this paper for the Rupee-coins. Also, if you think about it you can easily realize that crores and crores more of Rupee-coins would have to be minted if all paper money were abolished.

Perhaps, you may ask, "Then why not have paper money only? Why use silver and nickel and copper at all?" The answer is -because money must as we have already said, be something so useful that everyone wants. Also, because the metals are the best form of money; and thirdly because it would be impossible to print just the right amount of paper money that would keep prices at their proper natural level. If any Government prints too much paper money, then prices go up at once. The supply of money is increased and therefore its value (in food, clothes, books, houses, land, tools and everything else) goes down.

You may think at first that it is queer to talk of having too much paper money and that money is so nice and useful that you cannot have too much of it. But if you think that, I am afraid you are forgetting that money is only useful for what it will buy so it is no good at all having more money if there are no more things to buy with it the more money there is, the higher will be the prices of everything. The same thing happens with Rupee -coins as with paper money. But it is not likely to happen, for this reason: it is very easy to print a great deal of paper money, but not at all easy to increase the number of Rupee-coins.

Which of the options given below can be used to fill in the blank in the given passage with a word that fits perfectly grammatically and also contextually?

312836

decides

312837

assumes

312838

discovers

312839

guarantees

312840

realises

Correct Option:

312839

Candidate Response:

312839

203041

VERBAL
ABILITY

This passage consists of jumbled up sentences / parts of sentence. Rearrange the sentences as per the proper order and identify the third sentence after rearrangement

- a. everybody had exactly the same amount of money,
- b. however, they forget that very few people would work at all,
- c. One common mistake that many people have made is that,
- d. if it were not for the money their work brings them,
- e. they think it would be a very good thing if
- f. and that without work there would be no money
- g. no matter whether they worked hard or lived idly,

312841

a

312842

b

312843

d

312844

f

312845

g

Correct Option:

312841

Candidate Response:

312841

| | | | | | |
|----------------------------------|--------------------------------------|---|----------------------------------|--------------------------------------|--|
| 203042 | VERBAL ABILITY | <p>This passage consists of jumbled up sentences / parts of sentence. Rearrange the sentences as per the proper order and identify the sixth sentence after rearrangement.</p> <ul style="list-style-type: none"> a. everybody had exactly the same amount of money, b. however, they forget that very few people would work at all, c. One common mistake that many people have made is that, d. if it were not for the money their work brings them, e. they think it would be a very good thing if f. and that without work there would be no money g. no matter whether they worked hard or lived idly, <p>312846 a</p> <p>312847 b</p> <p>312848 c</p> <p>312849 d</p> <p>312850 f</p> <table border="1" style="width: 100%; margin-top: 20px;"> <tr> <td style="width: 50%;">Correct Option: 312849</td> <td style="width: 50%;">Candidate Response: 312846</td> </tr> </table> | Correct Option: 312849 | Candidate Response: 312846 | |
| Correct Option: 312849 | Candidate Response: 312846 | | | | |
| 203043 | VERBAL ABILITY | <p>This passage consists of jumbled up sentences / parts of sentence. Rearrange the sentences as per the proper order and identify the second sentence after rearrangement.</p> <ul style="list-style-type: none"> a. also, at several places in the desert b. A great part of Arabia is desert c. The sand is so hot that you cannot walk over it with your bare feet in the daytime d. here there is nothing but sand and rock e. one can find springs of water f. so deep that the sun cannot dry them up g. that come from deep down under the ground | | | |

312851

a

312852

c

312853

d

312854

f

312855

g

Correct Option:

312853

Candidate Response:

312853

203044

VERBAL
ABILITY

This passage consists of jumbled up sentences / parts of sentence. Rearrange the sentences as per the proper order and identify the fourth sentence after rearrangement.

- a. also, at several places in the desert
- b. A great part of Arabia is desert
- c. The sand is so hot that you cannot walk over it with your bare feet in the daytime
- d. here there is nothing but sand and rock
- e. one can find springs of water
- f. so deep that the sun cannot dry them up
- g. that come from deep down under the ground

312856

a

312857

c

312858

d

312859

f

312860

g

Correct Option:

312856

Candidate Response:

312856

203045

VERBAL
ABILITY

This passage consists of jumbled up sentences / parts of sentence. Rearrange the sentences as per the proper order and identify the second sentence after rearrangement.

- a. partly according to the climate in which they live
- b. The people of which it is made up
- c. The human race is spread all over the world
- d. and partly according to the kind of food
- e. which their country produces
- f. from the polar region to the tropics
- g. eat different kinds of food

312861

a

312862

c

312863

d

312864

e

312865

f

Correct Option:

312865

Candidate Response:

312861

203046

VERBAL
ABILITY

Which of the phrases given below the sentence should replace the word/phrase given in bold in the sentence to make it grammatically correct? If the sentence is correct as it is given and no correction is required, select 'No correction required' as your answer.

Vimal had a habit of **pass the buck** when it came to important issues at work.

312866

pass to bucking

312867

passing buck

312868

passing the buck

312869

pass buck

312870

pass bill

Correct Option:

312868

Candidate Response:

312868

203047

VERBAL
ABILITY

Read the Instructions and answer the question
Out of the given options below, choose the word that is closest in meaning to the word given in capital:

CONVALESCENT

312871

Convergent

312872

Pertinent

312873

Healing

312874

Acute

312875

Blend

Correct Option:

312873

Candidate Response:

312872

203048

VERBAL
ABILITY

Read the Instructions and answer the question
Out of the given options below, choose the word that is closest in meaning to the word given in capital:

RUMBUSTIOUS

312876

Antithesis

312877

Slow

312878

Playful

312879

Boisterous

312880

Cheerful

Correct Option:

312879

Candidate Response:

312876

203049

VERBAL
ABILITY

Read the Instructions and answer the question

Out of the given options below, choose the word that is closest in meaning to the word given in capital:

DEBILITATE

312881

Debate

312882

Disperse

312883

Meditate

312884

Anticipate

312885

Weaken

Correct Option:

312885

Candidate Response:

312883

203050

VERBAL
ABILITY

Read the Instructions and answer the question

Out of the given options below, choose the word that is opposite in meaning to the word given in capital:

DISMAL

312886

Despair

312887

Cheerful

312888

Trivial

312889

Ordinary

312890

Smiling

Correct Option:

312887

Candidate Response:

312886

203051

VERBAL
ABILITY

Read the Instructions and answer the question

Out of the given options below, choose the word that is opposite in meaning to the word given in capital:

PLIABLE

312891

Convenient

312892

Easy

312893

Brittle

312894

Arrogant

312895

Rigid

Correct Option:

312895

Candidate Response:

312892

203052

VERBAL
ABILITY

In the given passage, there are words / group of words highlighted in bold and underlined. You have to decide if the words / group of words given is / are correct grammatically and contextually. If not find out the appropriate word / group of words from the given options. In case the given highlighted words / group of words is / are correct, then mark that option as your answer.

Every year over a lakh of our students, seek admissions abroad spending about \$ 4 billion (Rs. 16,400 crore) annually. The **demand in** seats in metros is maddening. Even the less rated institutes are crowded with students. There is an **urgent need** in our country to expand the capacity of higher education. To **link** this huge demand – supply gap, one of the recommendations of the Knowledge Commission is to allow foreign universities in the country. The government it seems is all set to **follow** this recommendation. There is a possibility that the craze for a foreign label and lack of information about these institutes can leave thousands of students duped by fly by night operators, especially the franchisees. The government has to be **skeptical in** allowing entry to foreign universities. Only those institutions that are accredited by reputed organizations should be given permission to set up here

demand in

312896

surge in

312897

rush for

312898

split in

312899

line for

312900

The given and highlighted word(s) is / are correct

Correct Option:

312897

Candidate Response:

312897

203053

VERBAL
ABILITY

In the given passage, there are words / group of words highlighted in bold and underlined. You have to decide if the words / group of words given is / are correct grammatically and contextually. If not find out the appropriate word / group of words from the given options. In case the given highlighted words / group of words is / are correct, then mark that option as your answer.

Every year over a lakh of our students, seek admissions abroad spending about \$ 4 billion (Rs. 16,400 crore) annually. The **demand in** seats in metros is maddening. Even the less rated institutes are crowded with students. There is an **urgent need** in our country to expand the capacity of higher education. To **link** this huge demand – supply gap, one of the recommendations of the Knowledge Commission is to allow foreign universities in the country. The government it seems is all set to **follow** this recommendation. There is a possibility that the craze for a foreign label and lack of information about these institutes can leave thousands of students duped by fly by night operators, especially the franchisees. The government has to be **skeptical in** allowing entry to foreign universities. Only those institutions that are accredited by reputed organizations should be given permission to set up here

urgent need

312901

desperation

312902

rush

312903

imperative

312904

immediate focus

312905

The given and highlighted word(s) is / are correct

Correct Option:

312905

Candidate Response:

312903

203054

VERBAL
ABILITY

In the given passage, there are words / group of words highlighted in bold and underlined. You have to decide if the words / group of words given is / are correct grammatically and contextually. If not find out the appropriate word / group of words from the given options. In case the given highlighted words / group of words is / are correct, then mark that option as your answer.

Every year over a lakh of our students, seek admissions abroad spending about \$ 4 billion (Rs. 16,400 crore) annually. The **demand in** seats in metros is maddening. Even the less rated institutes are crowded with students. There is an **urgent need** in our country to expand the capacity of higher education. To **link** this huge demand – supply gap, one of the recommendations of the Knowledge Commission is to allow foreign universities in the country. The government it seems is all set to **follow** this recommendation. There is a possibility that the craze for a foreign label and lack of information about these institutes can leave thousands of students duped by fly by night operators, especially the franchisees. The government has to be **skeptical in** allowing entry to foreign universities. Only those institutions that are accredited by reputed organizations should be given permission to set up here

link

312906

orchestrate

312907

manipulate

312908

bridge

312909

align

312910

join

Correct Option:

312908

Candidate Response:

312908

203055

VERBAL
ABILITY

In the given passage, there are words / group of words highlighted in bold and underlined. You have to decide if the words / group of words given is / are correct grammatically and contextually. If not find out the appropriate word / group of words from the given options. In case the given highlighted words / group of words is / are correct, then mark that option as your answer.

Every year over a lakh of our students, seek admissions abroad spending about \$ 4 billion (Rs. 16,400 crore) annually. The **demand in** seats in metros is maddening. Even the less rated institutes are crowded with students. There is an **urgent need** in our country to expand the capacity of higher education. To **link** this huge demand – supply gap, one of the recommendations of the Knowledge Commission is to allow foreign universities in the country. The government it seems is all set to **follow** this recommendation. There is a possibility that the craze for a foreign label and lack of information about these institutes can leave thousands of students duped by fly by night operators, especially the franchisees. The government has to be **skeptical in** allowing entry to foreign universities. Only those institutions that are accredited by reputed organizations should be given permission to set up here

follow

312911

oblige

312912

apply

312913

change

312914

understand

312915

The given and highlighted word(s) is / are correct

Correct Option:

312915

Candidate Response:

312915

203056

VERBAL
ABILITY

In the given passage, there are words / group of words highlighted in bold and underlined. You have to decide if the words / group of words given is / are correct grammatically and contextually. If not find out the appropriate word / group of words from the given options. In case the given highlighted words / group of words is / are correct, then mark that option as your answer.

Every year over a lakh of our students, seek admissions abroad spending about \$ 4 billion (Rs. 16,400 crore) annually. The **demand in** seats in metros is maddening. Even the less rated institutes are crowded with students. There is an **urgent need** in our country to expand the capacity of higher education. To **link** this huge demand – supply gap, one of the recommendations of the Knowledge Commission is to allow foreign universities in the country. The government it seems is all set to **follow** this recommendation. There is a possibility that the craze for a foreign label and lack of information about these institutes can leave thousands of students duped by fly by night operators, especially the franchisees. The government has to be **skeptical in** allowing entry to foreign universities. Only those institutions that are accredited by reputed organizations should be given permission to set up here

skeptical in

312916

judicious in

312917

envious in

312918

discriminatory in

312919

flambouyant in

312920

proactive in

Correct Option:

312916

Candidate Response:

312919

| | | | | | |
|----------------------------------|--------------------------------------|--|----------------------------------|--------------------------------------|--|
| 203057 | VERBAL ABILITY | <p>In the following question, a sentence is written in different ways. Choose the sentence that is grammatically correct.</p> <p>a) Knowing the area is prone for earthquakes, all the buildings were reinforced with additional steel and concrete.</p> <p>b) Since the area was knowing to be prone to earthquakes, all the buildings were reinforced with additional steel and concrete.</p> <p>c) Being prone to earthquake, all the buildings were reinforced with additional steel and concrete.</p> <p>d) Since the area was prone to earthquakes, all the buildings were reinforced with additional steel and concrete.</p> <p>e) As the area was known to earthquakes, all the buildings were reinforced with additional steel and concrete.</p> <p>312921 a</p> <p>312922 b</p> <p>312923 c</p> <p>312924 d</p> <p>312925 e</p> <table border="1" data-bbox="518 1559 1230 1688"> <tr> <td>Correct Option: 312924</td> <td>Candidate Response: 312921</td> </tr> </table> | Correct Option: 312924 | Candidate Response: 312921 | |
| Correct Option: 312924 | Candidate Response: 312921 | | | | |
| 203058 | VERBAL ABILITY | | | | |

In the following question, a sentence is written in different ways. Choose the sentence that is grammatically correct.

- a) It must be noted that under no circumstance should the company go in for diversification.
- b) It must be noticed that under no circumstance should the company go in for diversification.
- c) It must be noted that under no circumstance should the company enter for diversification.
- d) It must be noted that under no circumstance should, company go in for diversification.
- e) It must be noted that under no circumstance should the company go in diversification.

312926

a

312927

b

312928

c

312929

d

312930

e

Correct Option:

312926

Candidate Response:

312926

203059

VERBAL
ABILITY

In the following question, a sentence is written in different ways. Choose the sentence that is grammatically correct.

- a) Some buildings that were destroyed and heavily damaged in the earthquake last year, are constructed in violation of the city's building code.
- b) Some buildings that were destroyed or heavily damaged in the earthquake last year, had been constructed in violation of the city's building code.
- c) Some buildings that are destroyed and heavily damaged in the earthquake last year, were constructed on violation of the city's building code.
- d) The earthquake destroyed some buildings and heavily damaged them last year, these are constructed in violation of the city's building code.
- e) The earthquake destroyed some buildings and heavily damaged them last year because they were constructed in violating the city's building code.

312931

a

312932

b

312933

c

312934

d

312935

e

Correct Option:

312932

Candidate Response:

312932

203060

VERBAL
ABILITY

In the following question, a sentence is written in different ways. Choose the sentence that is grammatically correct.

- a) The article tells the story of the famous author and the effective strategy he used to overcome his chronic illness.
- b) The article tells the story of the famous author and the effective strategy he used to overcoming his chronic illness.
- c) These article tells the story of the famous author and the effective strategy he used to overcome his chronic illness.
- d) The article tells the story of the famous author and his effective strategy, he used to overcome his chronic illness.
- e) The article tells the story of the famous author and how his effective strategy helped him to overcoming chronic illness.

312936

a

312937

b

312938

c

312939

d

312940

e

Correct Option:

312936

Candidate Response:

312936

203061

VERBAL
ABILITY

In the following question, a sentence is written in different ways. Choose the sentence that is grammatically correct.

- a) Had this notification been amended earlier, we should have stopped the transfer of funds.
- b) Had this notification been amended earlier, we would have stopped the transfer of funds.
- c) Had this notification have been amended earlier, we would have stopped the transfer of funds.
- d) Were this notification been amended earlier, we would have stopped the transfer of funds.
- e) Should this notification been amended earlier, we would have stopped the transfer of funds.

312941

a

312942

b

312943

c

312944

d

312945

Correct Option:

312942

Candidate Response:

312942

203062

VERBAL
ABILITY

In the following question a phrase of the sentence is printed in bold, find the option which can replace the phrase to make the sentence grammatically correct. If the given sentence is already grammatically correct then choose, 'No correction required' as the option.

The director insisted on his order being carried out **with the letter**.

312946

for the letter

312947

to the letter

312948

by the letter

312949

into the letter

312950

No correction required

Correct Option:

312947

Candidate Response:

312948

203063

VERBAL
ABILITY

In the following question a phrase of the sentence is printed in bold, find the option which can replace the phrase to make the sentence grammatically correct. If the given sentence is already grammatically correct then choose, 'No correction required' as the option.

He admired the speed with which Kaushal completed the work and **appreciating the method adopted** by him.

312951

appreciate the method being adopted

312952

appreciated the method adopted

312953

appreciate the method of adoption

312954

appreciate the adopting method

312955

No correction required

Correct Option:

312952

Candidate Response:

312952

203064

VERBAL
ABILITY

In the following sentence, the words in bold are gramatically wrong. Choose the option which is grammatically correct and expresses the meaning of sentence correctly.

I asked her **that how she got** time to write all these books.

312956

that how did she got

312957

that how she was getting

312958

how did she getting

312959

how she got

312960

that how did she get

Correct Option:

312959

Candidate Response:

312960

203065

VERBAL
ABILITY

Identify the correct sentence from the given options that represents, 'Personification' as a figure of speech.

- A. The wind whispered secrets through the rustling leaves.
- B. The wind was rustling the leaves.
- C. The wind was the lifeline of the wrecked ship.
- D. The wind is a broom, clearing the sidewalk of leaves.
- E. The wind was as sharp as a razor.

312961

A

312962

B

312963

C

312964

D

312965

E

Correct Option:

312961

Candidate Response:

312961

203066

VERBAL
ABILITY

In this question, four words are given in bold. One of these words given in bold may be wrongly spelt or inappropriate in the context of the sentence.

Find out the word that is inappropriately or wrongly spelt, if any. That word is your answer. If all the words given in bold are correctly spelt or appropriate in the context of the sentence, then mark 'All correct' as your answer.

My heart isn't **simple** or **straightforward**, it's a **complicated mess** of wants and needs.

312966

simple

312967

straightforward

312968

complicated

312969

mess

312970

All correct

Correct Option:

312970

Candidate Response:

312967

203067

VERBAL
ABILITY

Identify the correct figure of speech as represented by the given sentence:

"The food tasted awfully good."

312971

Personification

312972

Metaphor

312973

Exaggeration

312974

Irony

312975

Oxymoron

Correct Option:

312975

Candidate Response:

312973

203068

VERBAL
ABILITY

IDIOM

In the question an idiom is given, select the correct interpretation of the idiom from the given options below

“Throw in the towel”

312976

To surrender to temptation

312977

To accept defeat

312978

To give up a job

312979

To make a sacrifice

312980 To throw the towel to someone

Correct Option:

312977

Candidate Response:

312977

203069

VERBAL
ABILITY

IDIOM

In the question an idiom is given, select the correct interpretation of the idiom from the given options below

"Break the ice"

312981 To start a fight

312982 To solve a difficult problem

312983 To clear misunderstanding

312984 To clear the ice on the road

312985 To overcome social awkwardness

Correct Option:

312985

Candidate Response:

312983

203070

VERBAL
ABILITY

IDIOM

In the question an idiom is given, select the correct interpretation of the idiom from the given options below

"Play the devil's advocate"

312986

To argue that something bad is coming, even though it's calm right now

312987

To hear news of something that is a secret

312988

To follow a trend, and do what everyone else is doing

312989

To defend the guilty person by arguing on his behalf

312990

To argue the opposite of what you believe, just for the sake of argument

Correct Option:

312990

Candidate Response:

312989